

Write your name here

Surname

Other names

**Pearson**  
**Edexcel GCSE**

Centre Number

--	--	--	--	--	--

Candidate Number

--	--	--	--	--	--

# Mathematics A

## Paper 1 (Non-Calculator)

**Higher Tier**

Thursday 26 May 2016 – Morning

**Time: 1 hour 45 minutes**

Paper Reference

**1MA0/1H**

**You must have:** Ruler graduated in centimetres and millimetres, protractor, pair of compasses, pen, HB pencil, eraser. Tracing paper may be used.

Total Marks

### Instructions

- Use **black** ink or ball-point pen.
- **Fill in the boxes** at the top of this page with your name, centre number and candidate number.
- Answer **all** questions.
- Answer the questions in the spaces provided – *there may be more space than you need.*
- **Calculators must not be used.**



### Information

- The total mark for this paper is 100
- The marks for **each** question are shown in brackets – *use this as a guide as to how much time to spend on each question.*
- Questions labelled with an **asterisk** (\*) are ones where the quality of your written communication will be assessed.

### Advice

- Read each question carefully before you start to answer it.
- Keep an eye on the time.
- Try to answer every question.
- Check your answers if you have time at the end.

Turn over ►

P49302A

©2016 Pearson Education Ltd.

6/6/6/1/



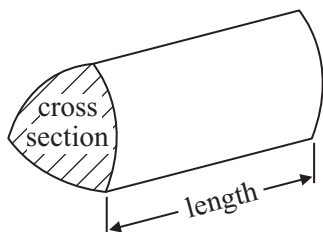
**PEARSON**

## GCSE Mathematics 1MA0

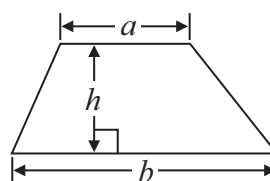
Formulae: Higher Tier

**You must not write on this formulae page.  
Anything you write on this formulae page will gain NO credit.**

**Volume of prism** = area of cross section  $\times$  length

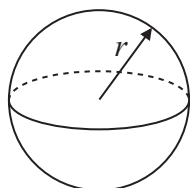


**Area of trapezium** =  $\frac{1}{2} (a + b)h$



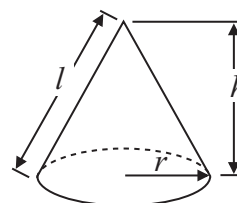
**Volume of sphere** =  $\frac{4}{3} \pi r^3$

**Surface area of sphere** =  $4\pi r^2$

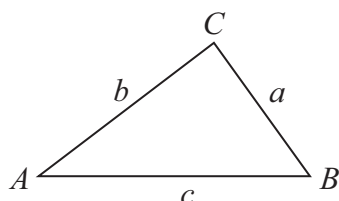


**Volume of cone** =  $\frac{1}{3} \pi r^2 h$

**Curved surface area of cone** =  $\pi r l$



**In any triangle ABC**



**The Quadratic Equation**

The solutions of  $ax^2 + bx + c = 0$  where  $a \neq 0$ , are given by

$$x = \frac{-b \pm \sqrt{b^2 - 4ac}}{2a}$$

**Sine Rule**  $\frac{a}{\sin A} = \frac{b}{\sin B} = \frac{c}{\sin C}$

**Cosine Rule**  $a^2 = b^2 + c^2 - 2bc \cos A$

**Area of triangle** =  $\frac{1}{2} ab \sin C$

DO NOT WRITE IN THIS AREA

DO NOT WRITE IN THIS AREA

DO NOT WRITE IN THIS AREA



Answer ALL questions.

Write your answers in the spaces provided.

You must write down all stages in your working.

You must NOT use a calculator.

- 1 The diagram shows a prism.

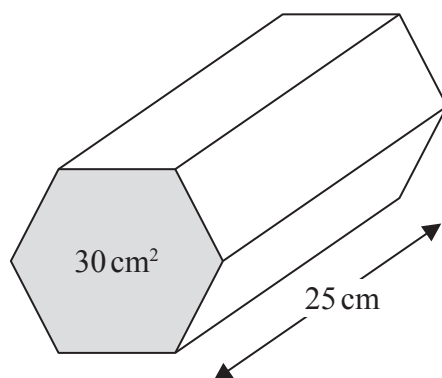


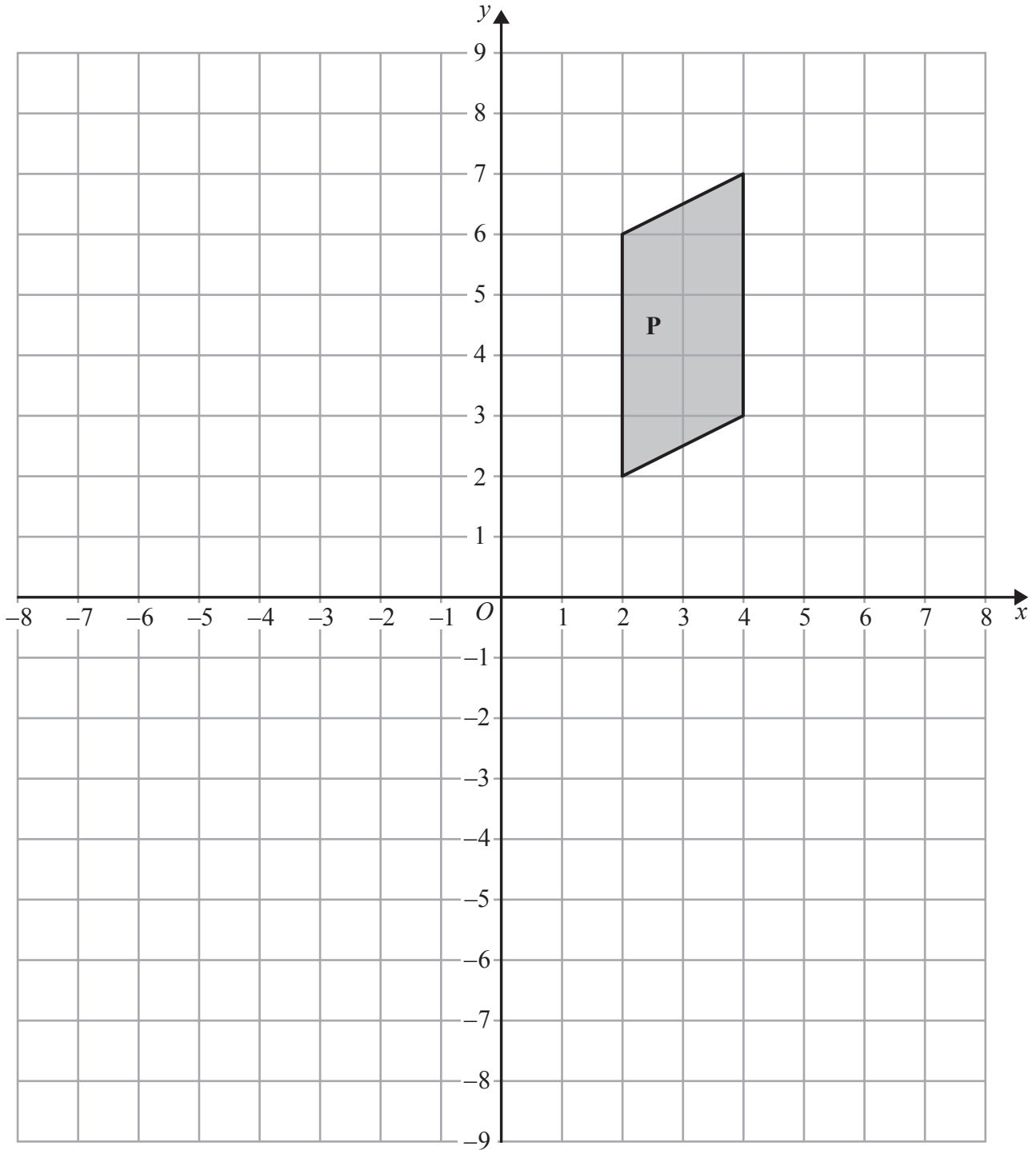
Diagram NOT  
accurately drawn

The area of the cross section of the prism is  $30 \text{ cm}^2$ .  
The length of the prism is 25 cm.

Work out the volume of the prism.

.....  
(Total for Question 1 is 3 marks)





(a) Reflect shape **P** in the line  $x = -1$

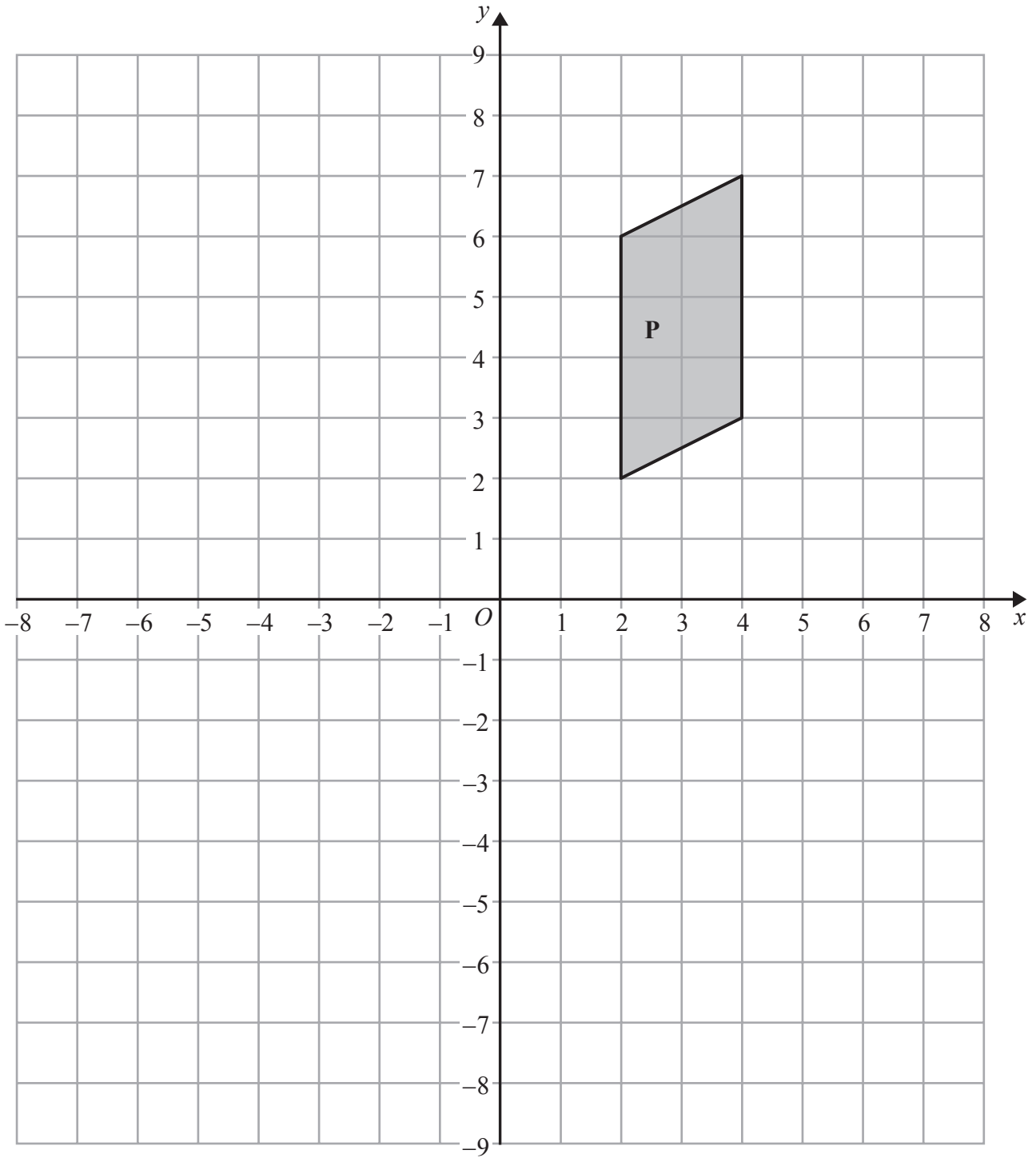
(2)



DO NOT WRITE IN THIS AREA

DO NOT WRITE IN THIS AREA

DO NOT WRITE IN THIS AREA



(b) Rotate shape **P**  $90^\circ$  anticlockwise about  $(0, 1)$ .

(2)

(Total for Question 2 is 4 marks)



3 Richard wants to find out how often people buy crisps.  
He uses this question on a questionnaire.

How often do you buy crisps?

Often  Sometimes  Never

(a) Write down **two** things that are wrong with this question.

1.....

.....

2.....

.....

(2)

(b) Design a better question for Richard to use on his questionnaire to find out how often people buy crisps.

(2)

Richard is going to ask the students in his maths class to answer his questionnaire.

(c) This may **not** be a good sample to use.  
Give one reason why.

.....

.....

(1)

(Total for Question 3 is 5 marks)



4 (a) Simplify  $p^2 \times p^5$

.....  
(1)

(b) Simplify  $g^6 \div g^4$

.....  
(1)

(c) Simplify  $(k^3)^2$

.....  
(1)

(d) Expand and simplify  $3(m + 4) - 2(4m + 1)$

.....  
(2)

(e) Factorise  $n^2 - 7n$

.....  
(1)

**(Total for Question 4 is 6 marks)**

---



- 5 There are 892 litres of oil in Mr Aston's oil tank.  
He uses 18.7 litres of oil each day.

**Estimate** the number of days it will take him to use all the oil in the tank.

.....  
(Total for Question 5 is 2 marks)

- 6 One of the teachers at a school is chosen at random.

The probability that this teacher is female is  $\frac{3}{5}$

There are 36 **male** teachers at the school.

Work out the total number of teachers at the school.

.....  
(Total for Question 6 is 3 marks)





DO NOT WRITE IN THIS AREA

DO NOT WRITE IN THIS AREA

DO NOT WRITE IN THIS AREA

\*7 The diagram shows the plan of a floor.

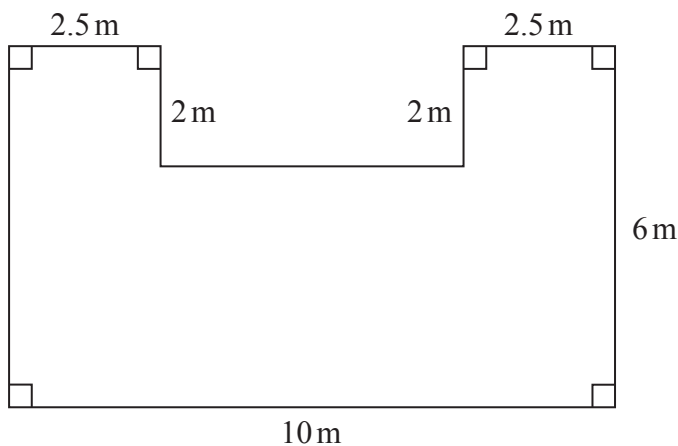


Diagram **NOT** accurately drawn

Angie is going to varnish the floor.

She needs 1 litre of varnish for  $5 \text{ m}^2$  of floor.

There are 2.5 litres of varnish in each tin of varnish.

Angie has 3 tins of varnish.

Does she have enough varnish for all the floor?

You must show all your working.

(Total for Question 7 is 5 marks)



8 Carol spins a spinner 80 times.

The table shows information about her results.

Outcome	Frequency
J	39
K	25
L	16

Dan spins this spinner 300 times.

Work out an estimate for the number of times that Dan will get an L.

.....  
(Total for Question 8 is 3 marks)

9 A shop sells packets of envelopes.

There are 5 envelopes in a small packet.

There are 20 envelopes in a large packet.

There is a total of  $T$  envelopes in  $x$  small packets and  $y$  large packets.

Write down a formula for  $T$  in terms of  $x$  and  $y$ .

.....  
(Total for Question 9 is 3 marks)



10

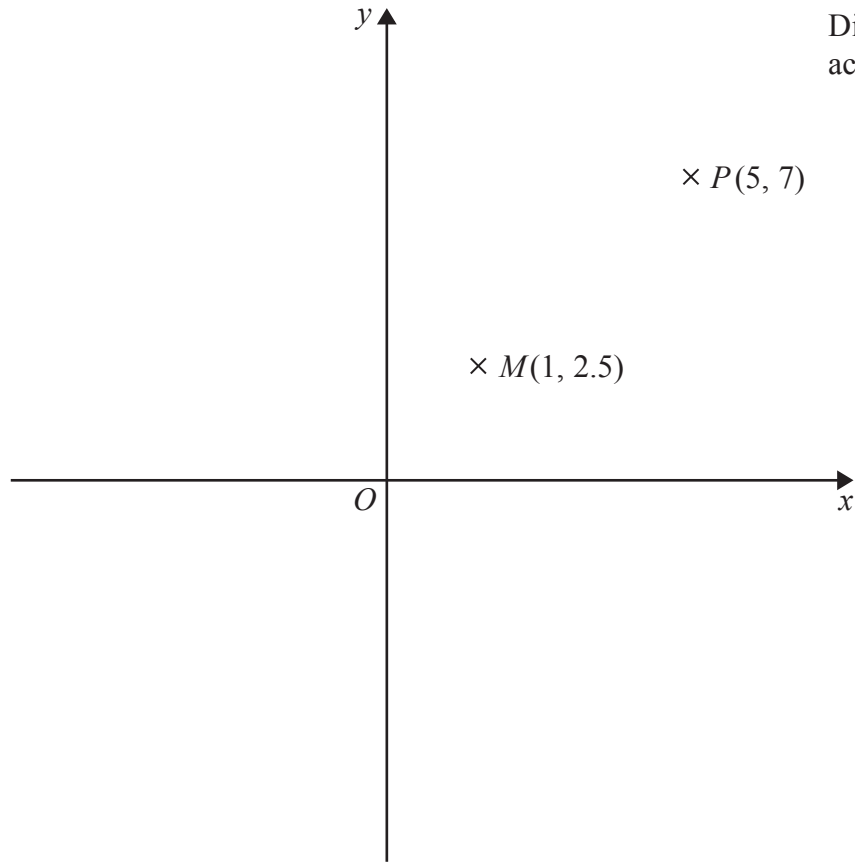


Diagram NOT accurately drawn

Point  $P$  has coordinates  $(5, 7)$ .  
Point  $M$  has coordinates  $(1, 2.5)$ .

Point  $M$  is the midpoint of the line  $PQ$ .

Find the coordinates of point  $Q$ .

(....., .....) )

(Total for Question 10 is 2 marks)

DO NOT WRITE IN THIS AREA

DO NOT WRITE IN THIS AREA

DO NOT WRITE IN THIS AREA



- 11** 66 people went on a day trip.  
Each person did only one activity on the trip.

Each person went skating or went to an art gallery or went bowling.

43 of the people are female.

4 of the 10 people who went skating are male.

20 of the people went to the art gallery.

10 males went bowling.

Work out the number of females who went to the art gallery.

.....  
**(Total for Question 11 is 4 marks)**

DO NOT WRITE IN THIS AREA

DO NOT WRITE IN THIS AREA

DO NOT WRITE IN THIS AREA



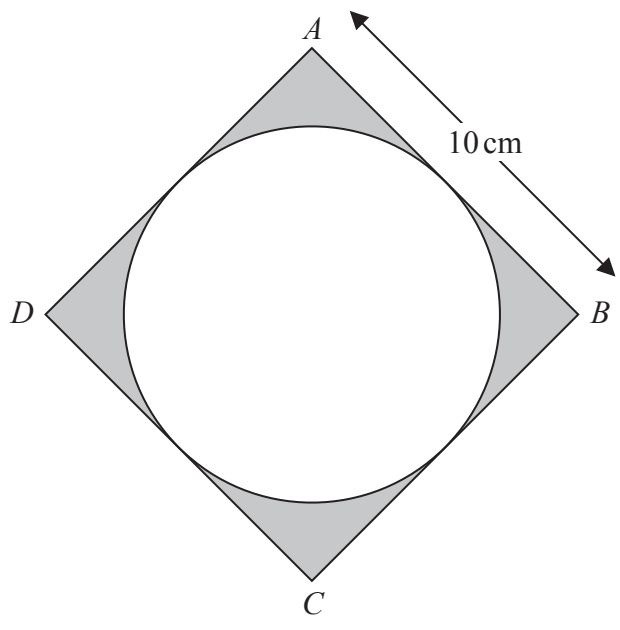
DO NOT WRITE IN THIS AREA

DO NOT WRITE IN THIS AREA

DO NOT WRITE IN THIS AREA

12 The diagram shows a circle inside a square.

Diagram NOT accurately drawn



$ABCD$  is a square of side 10 cm.  
Each side of the square is a tangent to the circle.

Work out the total area of the shaded regions in terms of  $\pi$ .  
Give your answer in its simplest form.

.....  $\text{cm}^2$

(Total for Question 12 is 3 marks)



13 The table gives information about Ali's spending last month.

Item	Percentage of total spending
rent	30%
food	15%
transport	12%
other	43%

Ali's total spending last month was £800

Next month Ali's rent, in pounds, is going to rise by 20%.  
His total spending will still be the same.

Express the amount of money Ali will spend on rent next month as a percentage of £800

.....%

**(Total for Question 13 is 3 marks)**

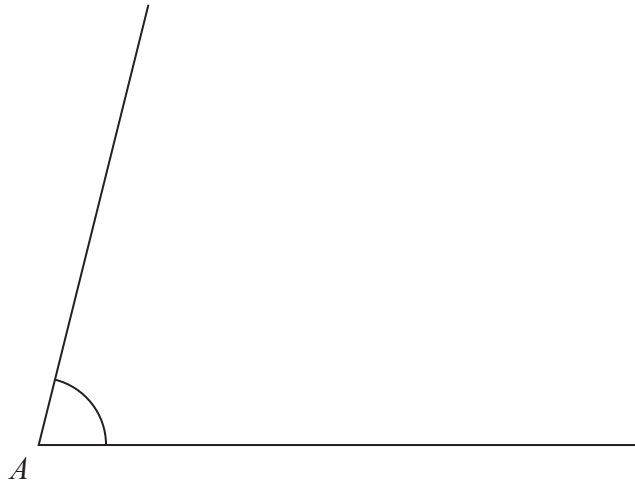
DO NOT WRITE IN THIS AREA

DO NOT WRITE IN THIS AREA

DO NOT WRITE IN THIS AREA




- 14 (a) Use ruler and compasses to bisect the angle at  $A$ .  
You must show all your construction lines.



(2)

- (b) Use ruler and compasses to construct the perpendicular from the point  $P$  to the line  $QR$ .  
You must show all your construction lines.

$P$   
×

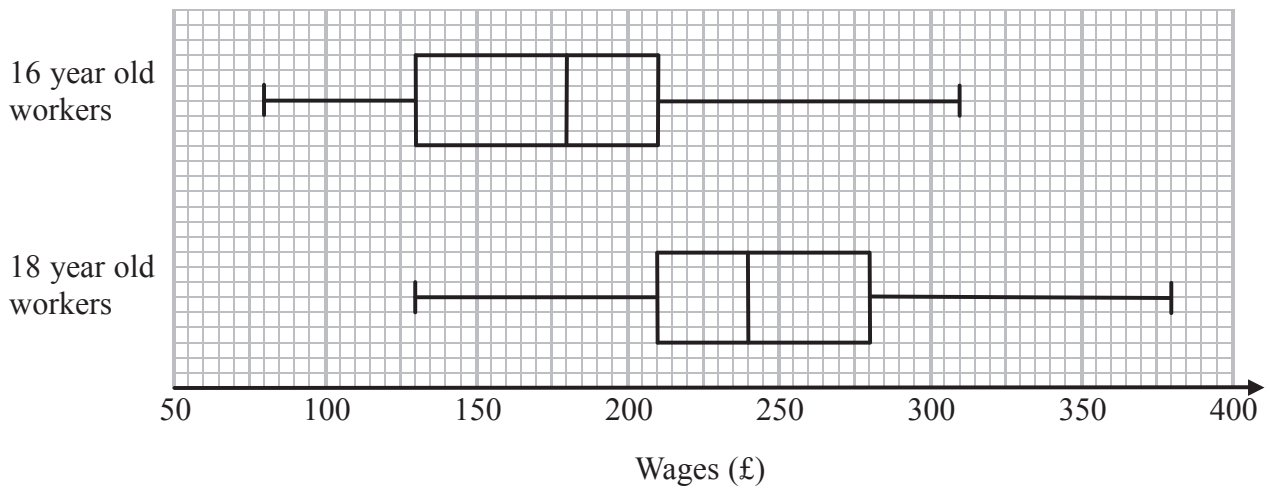


(2)

(Total for Question 14 is 4 marks)



- 15 The box plots give information about the wages of a group of 16 year old workers and a group of 18 year old workers.



- \*(a) Compare the distribution of the wages of the 16 year old workers with the distribution of the wages of the 18 year old workers.

(3)





There are 200 workers who are 16 years old.

(b) Work out an estimate for the number of these workers whose wages are £130 or more.

.....  
(2)

**(Total for Question 15 is 5 marks)**

---

**16** Work out the value of  $(3.5 \times 10^6) \div (5 \times 10^{-3})$   
Give your answer in standard form.

.....  
**(Total for Question 16 is 2 marks)**

---



17 (a) Solve  $3x - 5 < 16$

DO NOT WRITE IN THIS AREA

.....  
(2)

(b) Solve  $\frac{11 - w}{4} = 1 + w$

DO NOT WRITE IN THIS AREA

$w =$  .....  
(3)

**(Total for Question 17 is 5 marks)**

DO NOT WRITE IN THIS AREA



18 (a) Work out  $1\frac{1}{5} \times 2\frac{1}{3}$

Give your answer as a mixed number in its simplest form.

.....  
(3)

(b) Work out  $2\frac{7}{15} - 1\frac{2}{3}$

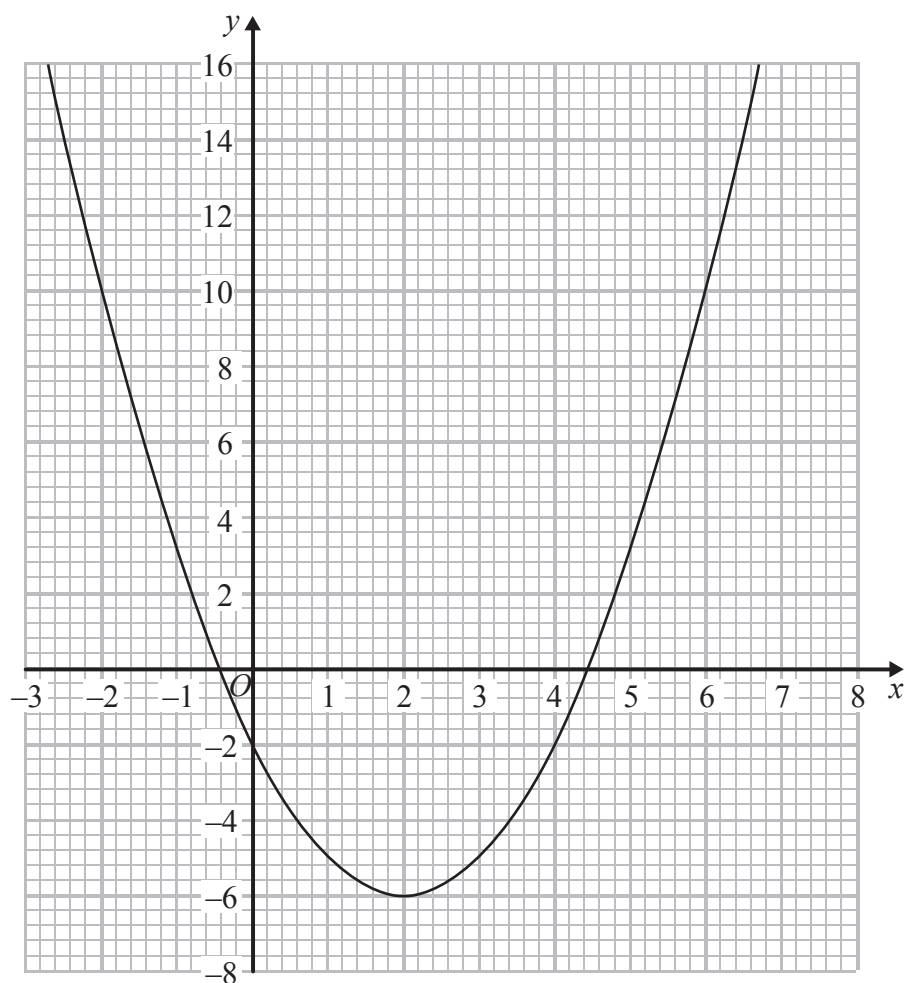
.....  
(3)

**(Total for Question 18 is 6 marks)**

---



19 The diagram shows the graph of  $y = x^2 - 4x - 2$



(a) Use the graph to find estimates for the solutions of

(i)  $x^2 - 4x - 2 = 0$

.....

(ii)  $x^2 - 4x - 6 = 0$

.....

(3)

(b) Use the graph to find estimates for the values of  $x$  that satisfy the simultaneous equations

$$y = x^2 - 4x - 2$$

$$x + y = 6$$

.....

(3)

(Total for Question 19 is 6 marks)



\*20

DO NOT WRITE IN THIS AREA

DO NOT WRITE IN THIS AREA

DO NOT WRITE IN THIS AREA

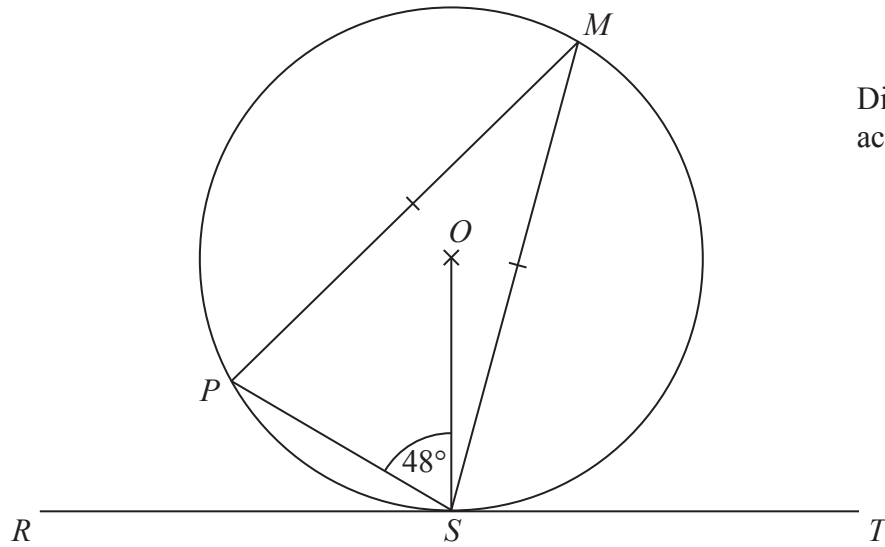


Diagram NOT accurately drawn

$P$ ,  $M$  and  $S$  are points on a circle, centre  $O$ .  
 $RST$  is a tangent to the circle.

Angle  $PSO = 48^\circ$   
 $MP = MS$

Work out the size of angle  $MST$ .  
Give reasons for each stage of your working.

(Total for Question 20 is 5 marks)

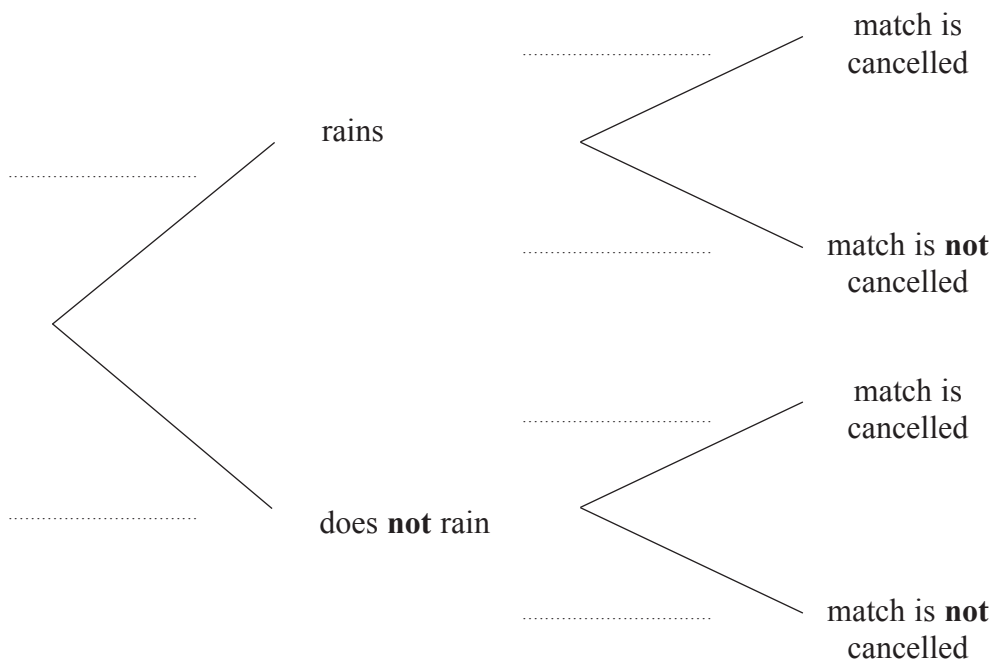


21 The probability that it will rain on a day in June is 0.2

When it rains the probability that my tennis match is cancelled is 0.7

When it does **not** rain, the probability that my tennis match is **not** cancelled is 0.95

(a) Complete the probability tree diagram for this information.



(3)

(b) Work out the probability that, on a day in June, it does **not** rain and my tennis match is cancelled.

(2)

(Total for Question 21 is 5 marks)



22 Solve  $x^2 = 4(x - 3)^2$

DO NOT WRITE IN THIS AREA

DO NOT WRITE IN THIS AREA

DO NOT WRITE IN THIS AREA

.....  
(Total for Question 22 is 3 marks)

---



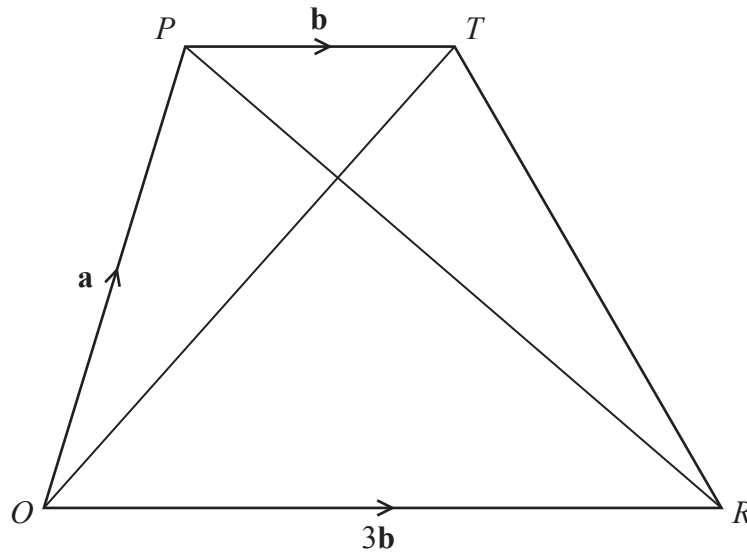


Diagram **NOT**  
accurately drawn

$OPTR$  is a trapezium.

$$\vec{OP} = \mathbf{a}$$

$$\vec{PT} = \mathbf{b}$$

$$\vec{OR} = 3\mathbf{b}$$

(a) (i) Find  $\vec{OT}$  in terms of  $\mathbf{a}$  and  $\mathbf{b}$

(ii) Find  $\vec{PR}$  in terms of  $\mathbf{a}$  and  $\mathbf{b}$   
Give your answer in its simplest form.

(2)





DO NOT WRITE IN THIS AREA

DO NOT WRITE IN THIS AREA

DO NOT WRITE IN THIS AREA

$S$  is the point on  $PR$  such that  $PS : SR = 1 : 3$

- (b) Find  $\vec{OS}$  in terms of  $\mathbf{a}$  and  $\mathbf{b}$   
Give your answer in its simplest form.

.....  
(2)

- \*(c) What does your answer to part (b) tell you about the position of point  $S$ ?

.....  
(2)

(Total for Question 23 is 6 marks)



24 Given that  $y \propto \frac{1}{x^2}$ , complete this table of values.

$x$	1	2	5	10
$y$				1

(Total for Question 24 is 4 marks)

DO NOT WRITE IN THIS AREA

DO NOT WRITE IN THIS AREA

DO NOT WRITE IN THIS AREA



DO NOT WRITE IN THIS AREA

DO NOT WRITE IN THIS AREA

DO NOT WRITE IN THIS AREA

25  $ABD$  is a right angled triangle.

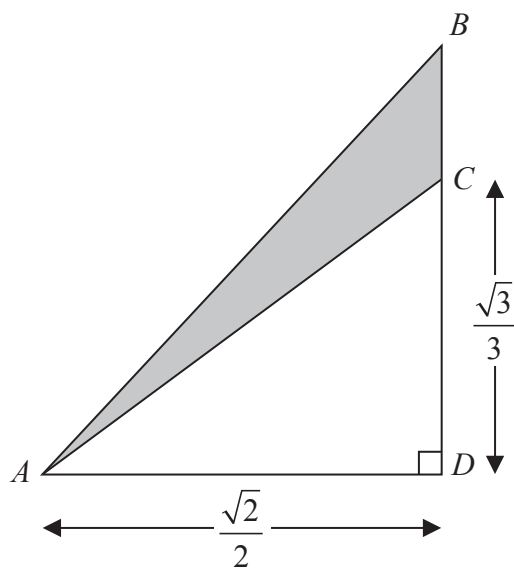


Diagram **NOT** accurately drawn

All measurements are given in centimetres.

$C$  is the point on  $BD$  such that  $CD = \frac{\sqrt{3}}{3}$

$$AD = BD = \frac{\sqrt{2}}{2}$$

Work out the exact area, in  $\text{cm}^2$ , of the shaded region.

..... $\text{cm}^2$

(Total for Question 25 is 3 marks)

**TOTAL FOR PAPER IS 100 MARKS**



DO NOT WRITE IN THIS AREA

DO NOT WRITE IN THIS AREA

DO NOT WRITE IN THIS AREA

**BLANK PAGE**

