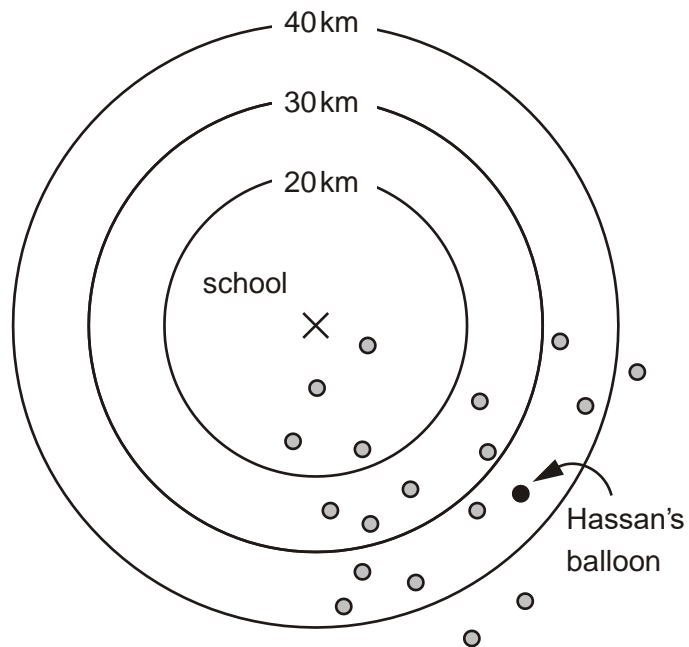



1. Class 6 launched some balloons at a school fete.



This diagram shows how far some of the balloons travelled.




How many balloons on the diagram travelled between 20km and 30km?



1 mark

Estimate how far Hassan's balloon travelled.

  km

1 mark

2.



The cost for using a minibus is £1.36 for each kilometre.

8 friends go on a 114 kilometre journey.

They share the cost equally.

How much does each person pay?

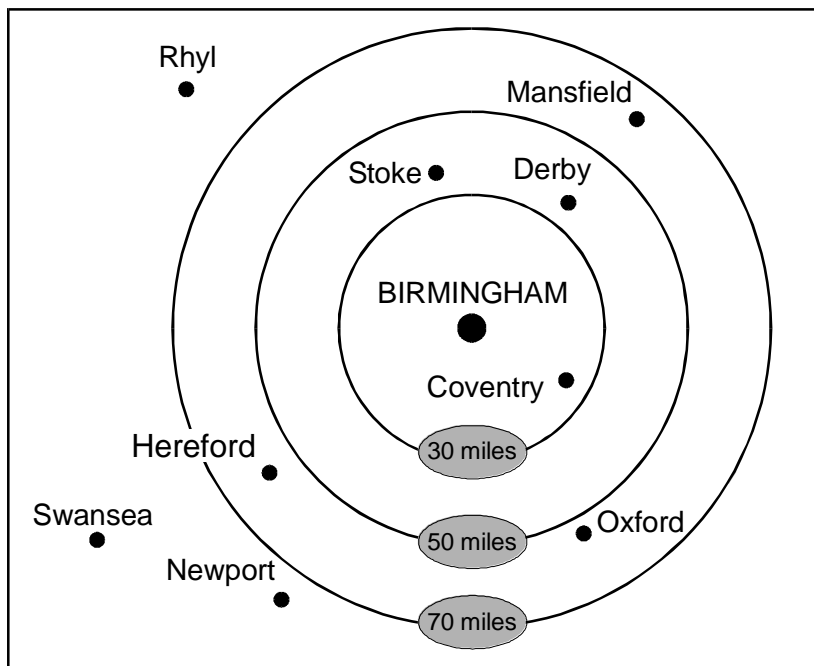


Show your **method**.  
You may get a mark.


£

2 marks

3. This diagram shows the distances of different towns from Birmingham.





Write the name of a town which is **between 30 and 50 miles** from Birmingham.



.....

1 mark

Use the diagram to estimate the distance in **miles** from **Birmingham** to **Mansfield**.



miles

1 mark