

Write your name here

Surname

Other names

Centre Number

Candidate Number

Edexcel GCSE

Physics/Science

Unit P1: Universal Physics

Foundation Tier

Thursday 24 May 2012 – Morning

Time: 1 hour

Paper Reference

5PH1F/01

You must have:

Calculator, ruler

Total Marks

Instructions

- Use **black** ink or ball-point pen.
- **Fill in the boxes** at the top of this page with your name, centre number and candidate number.
- Answer **all** questions.
- Answer the questions in the spaces provided – *there may be more space than you need.*

Information

- The total mark for this paper is 60.
- The marks for **each** question are shown in brackets – *use this as a guide as to how much time to spend on each question.*
- Questions labelled with an **asterisk** (*) are ones where the quality of your written communication will be assessed – *you should take particular care with your spelling, punctuation and grammar, as well as the clarity of expression, on these questions.*

Advice

- Read each question carefully before you start to answer it.
- Keep an eye on the time.
- Try to answer every question.
- Check your answers if you have time at the end.

Turn over ►

P40241A

©2012 Pearson Education Ltd.

1/1/1/1/



PEARSON

FORMULAE

You may find the following formulae useful

wave speed = frequency \times wavelength

$$v = f \times \lambda$$

wave speed = $\frac{\text{distance}}{\text{time}}$

$$v = \frac{x}{t}$$

electrical power = current \times potential difference

$$P = I \times V$$

cost of electricity = power \times time \times cost of 1 kilowatt-hour

power = $\frac{\text{energy used}}{\text{time taken}}$

$$P = \frac{E}{t}$$

efficiency = $\frac{(\text{useful energy transferred by the device})}{(\text{total energy supplied to the device})} \times 100\%$



Answer ALL questions.

Some questions must be answered with a cross in a box ☒. If you change your mind about an answer, put a line through the box ☒ and then mark your new answer with a cross ☒.

Scaring cats with ultrasound

- 1 Anna uses a device to keep cats away from her garden.
This device emits some ultrasound waves that cats do not like.



- (a) Which of these could be the frequency of the ultrasound waves?

Put a cross (☒) in the box next to your answer.

(1)

- A 23 000 Hz
- B 2300 Hz
- C 230 Hz
- D 23 Hz

- (b) State another use for ultrasound waves.

(1)



(c) Anna has good hearing but she cannot hear the ultrasound waves from the device. However, a cat can hear them.

Explain this difference.

(2)

.....

.....

.....

.....

(d) Anna finds a leaflet about how the device works.

- A cat approaches the device.
- Heat from the cat is emitted as infrared rays.
- The device detects these infrared rays.
- Then the device emits ultrasound waves.
- These waves scare the cat away.

(i) The speed of the ultrasound waves is 340 m/s. The ultrasound takes 0.047 s to reach the cat.

Calculate the distance between the device and the cat.

$$\text{distance (m)} = \text{wave speed (m/s)} \times \text{time (s)}$$

(2)

distance = m



- (ii) The infrared rays from the cat take much less than 0.047 s to reach the device.
The infrared rays and the ultrasound waves travel the same distance.

Suggest why the infrared rays take much less time than the ultrasound waves.

(2)

.....

.....

.....

.....

(Total for Question 1 = 8 marks)



Ionising radiations

2 A radioactive source emits three types of ionising radiation

alpha
beta
gamma

(a) Complete the sentence by putting a cross (☒) in the box next to your answer.

Radioactive sources emit radiation

(1)

- A all the time
- B at regular intervals
- C every few minutes
- D only when they are heated

(b) Use words from the box to complete the table.

(3)

atom	energy	molecule
particle	source	wave

radiation	type	transfer
alpha	particle	energy
beta	energy
gamma



(c) State **two** uses of gamma radiation.

(2)

.....

.....

.....

.....

(d) Stars can emit gamma waves and light waves.

Gamma waves and light waves are both parts of the electromagnetic spectrum.

Explain why it takes the same time for both of these waves to travel from the star to a space telescope.

(2)

.....

.....

.....

.....

(Total for Question 2 = 8 marks)



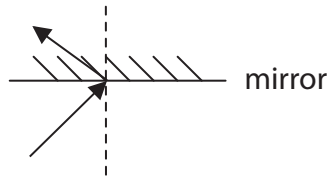
Visible light

3 Mirrors and lenses can be used in telescopes.

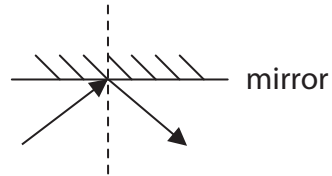
(a) Which diagram best shows what happens to a ray of light when it hits a plane mirror?

Put a cross (☒) in the box next to your answer.

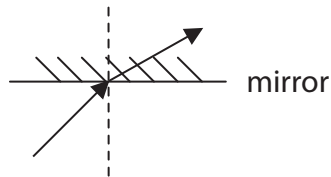
(1)



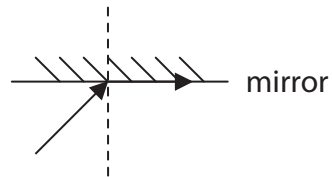
A



B



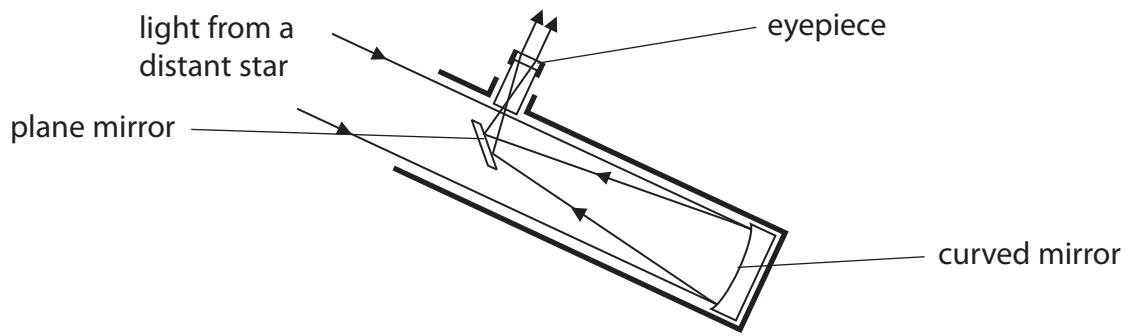
C



D



(b) The diagram shows light rays in a reflecting telescope.



(i) Describe what the mirrors and the eyepiece do to the light rays to form an image of a distant star.

(3)

.....

.....

.....

.....

.....

.....

(ii) Explain an advantage of using a telescope instead of the naked eye to look at stars.

(2)

.....

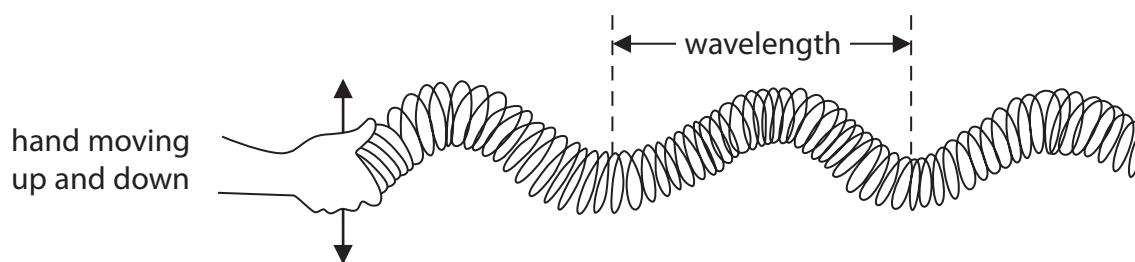
.....

.....

.....



- (c) Light travels through space as a wave.
A model of this type of wave can be made using a Slinky spring.
A Slinky spring is a long coil of wire like the one shown in the diagram.



(i) State the name of this type of wave. (1)

(ii) How could the movement of the hand be changed to make the amplitude of this wave bigger?

Put a cross (☒) in the box next to your answer.

(1)

- A** move up and down a smaller distance
- B** move up and down at a faster rate
- C** move up and down a bigger distance
- D** move up and down at a slower rate

(iii) The wave shown in the model has a wavelength of 0.5 m and the frequency is 4 Hz.

Calculate the speed of the wave.

(2)

speed of wave = m/s

(Total for Question 3 = 10 marks)



The power of television

4 Modern televisions use small amounts of power.

(a) Which of these describes power?

Put a cross (☒) in the box next to your answer.

(1)

- A distance travelled per second
- B energy transferred
- C energy transferred per second
- D work done

(b) A television is connected to the 230 V mains.

When it is switched on, the current in the television is 0.25 A.

(i) Calculate the power consumption of the television when it is switched on.

(2)

power consumption = W

(ii) Describe what is meant by **current**.

(2)

.....

.....

.....

.....



(c) When the television is switched to standby, the power consumption falls to 0.5 W.

(i) State how this changes the current in the television.

(1)

(ii) The cost of electricity is 26p per kW h.

Show that the cost of leaving the television on standby for 48 hours is less than 1p.

(3)

(iii) It is cheaper to switch the television off instead of leaving it on standby.

Suggest another reason why it is better not to leave the television on standby.

(1)

(Total for Question 4 = 10 marks)



Running like clockwork

- 5 The diagram shows Simon's clock.
Once a week, Simon turns a key to tighten the spring.
The spring uncoils slowly to keep the clock working.



- (a) Which type of energy is stored in the tightened spring?

Put a cross (☒) in the box next to your answer.

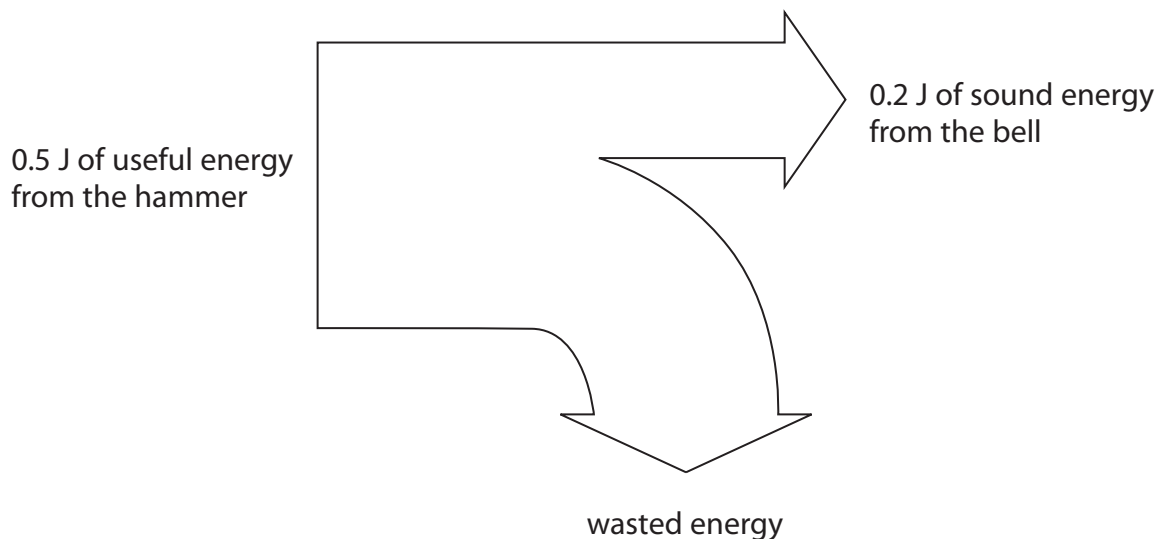
(1)

- A chemical energy
- B elastic potential energy
- C gravitational potential energy
- D thermal energy



- (b) Every hour, the clock chimes to remind Simon of the time.
The clock lifts a small hammer.
The hammer falls and rings a little bell.

The diagram shows what happens to the energy from the falling hammer.



- (i) Calculate the energy wasted.

(1)

wasted energy = J

- (ii) Calculate the efficiency of this process.

(2)

efficiency =



(iii) Suggest what happens to the wasted energy.

(2)

.....

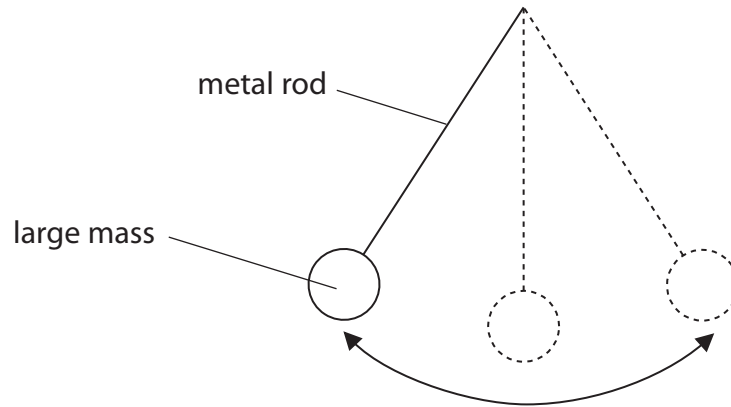
.....

.....

.....



*(c) The clock uses a pendulum.
The pendulum is a metal rod with a large mass at the end.
The mass swings from side to side.



The spring keeps the pendulum swinging without stopping.

Describe the energy changes that happen as the pendulum continues to swing from side to side.

(6)

.....

.....

.....

.....

.....

.....

.....

.....

.....

.....

.....

.....

.....

.....

.....

.....

.....

.....

.....

.....

.....

.....

.....

(Total for Question 5 = 12 marks)



Stars and galaxies

- 6 (a) The image shows the Andromeda galaxy.



- (i) Complete the sentence by putting a cross (☒) in the box next to your answer.

Andromeda is just one of many millions of galaxies that form the

(1)

- A constellations
- B planets
- C stars
- D Universe

- (ii) State the name of the galaxy that contains our Solar System.

(1)



(b) When astronomers study distant galaxies, they notice changes to the waves they observe.

(i) Describe the changes to the waves they observe.

(2)

.....

.....

.....

.....

(ii) State the evidence that astronomers have observed to support the Big Bang theory for the origin of the Universe.

(2)

.....

.....

.....

.....



*(c) By observing stars in distant galaxies, astronomers have been able to identify the different stages in the life of a star.

Describe the life cycle, from birth to death, of a star that is similar in mass to our Sun.

You may draw labelled diagrams to help with your answer.

(6)

.....

.....

.....

.....

.....

.....

.....

.....

.....

.....

.....

.....

.....

.....

.....

.....

.....

.....

.....

.....

.....

.....

(Total for Question 6 = 12 marks)

TOTAL FOR PAPER = 60 MARKS



BLANK PAGE

