

Thursday 23 May 2013 – Morning

**GCSE GATEWAY SCIENCE
CHEMISTRY B**

B741/01 Chemistry modules C1, C2, C3 (Foundation Tier)

Candidates answer on the Question Paper.
A calculator may be used for this paper.

OCR supplied materials:
None

Other materials required:

- Pencil
- Ruler (cm/mm)

Duration: 1 hour 15 minutes



Candidate forename		Candidate surname	
-----------------------	--	----------------------	--

Centre number						Candidate number				
---------------	--	--	--	--	--	------------------	--	--	--	--

INSTRUCTIONS TO CANDIDATES

- Write your name, centre number and candidate number in the boxes above. Please write clearly and in capital letters.
- Use black ink. HB pencil may be used for graphs and diagrams only.
- Answer **all** the questions.
- Read each question carefully. Make sure you know what you have to do before starting your answer.
- Write your answer to each question in the space provided. Additional paper may be used if necessary but you must clearly show your candidate number, centre number and question number(s).
- Do **not** write in the bar codes.

INFORMATION FOR CANDIDATES

- Your quality of written communication is assessed in questions marked with a pencil (✎).
- The Periodic Table can be found on the back page.
- The number of marks is given in brackets [] at the end of each question or part question.
- The total number of marks for this paper is **75**.
- This document consists of **28** pages. Any blank pages are indicated.

Answer **all** the questions.

SECTION A – Module C1

1 Clean air is a mixture of gases.

The gases include nitrogen, oxygen and carbon dioxide.

The percentages of these gases do not vary much.

This is because of **photosynthesis** and **respiration**.

(a) Complete the sentences about photosynthesis and respiration.

Choose words from the list.

carbon dioxide

decreases

increases

nitrogen

oxygen

(i) Photosynthesis increases the percentage of in the air
and decreases the percentage of [1]

(ii) Respiration the percentage of carbon dioxide in the
air and the percentage of oxygen. [1]

(b) **Carbon monoxide** is a pollutant sometimes found in air.

Write about a **source** of carbon monoxide pollution and a **problem** caused by carbon monoxide.

.....
.....
..... [2]

(c)



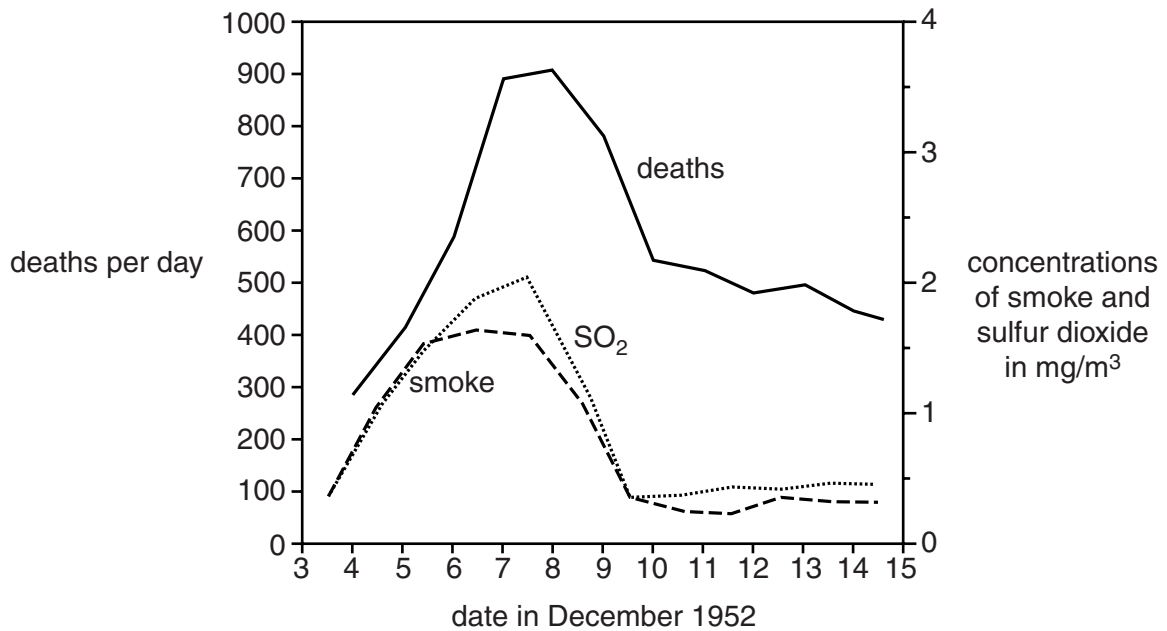
Air quality in the UK has improved over the last 60 years.

In December 1952, air pollution was so bad in London that sometimes people could not see their own feet.

Look at the graph.

It shows the number of deaths each day in London, between 3 December and 15 December 1952.

It also shows the concentrations of smoke and sulfur dioxide.



Describe the relationship between the number of deaths and the concentrations of smoke and sulfur dioxide.

.....

.....

..... [2]

(d) Catalytic converters are fitted to cars to help reduce air pollution.

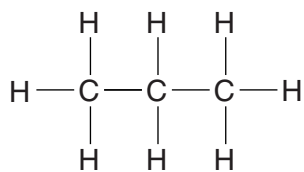
Write down a pollutant removed by catalytic converters.

..... [1]

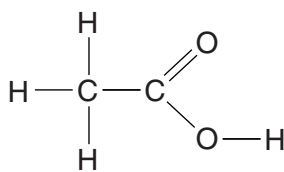
[Total: 7]

Turn over

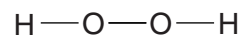
2 Look at the displayed formulas of some compounds.



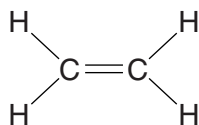
compound **A**



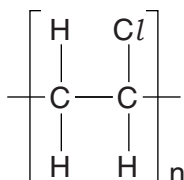
compound **B**



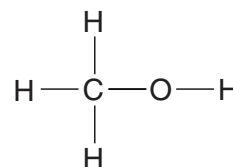
compound **C**



compound **D**



compound **E**



compound **F**

(a) Write down a compound that is a **hydrocarbon**.

Choose from **A, B, C, D, E** or **F**.

.....

[1]

(b) Look at the displayed formula for compound **B**.

How many **different elements** are in compound **B**?

.....

[1]

(c) Compound **E** is a polymer called poly(chloroethene).

Write down the name of the **monomer** that poly(chloroethene) is made from.

..... [1]

(d) Different polymers have different properties.

The uses of a polymer depend on its properties.

Look at the table. It compares the properties of three polymers, **A**, **B** and **C**.

	Density in g/cm ³	Maximum useable temperature in °C	Strength in MPa (1 = weak, 10 = strong)	Relative flexibility
polymer A	0.92	85	1	flexible
polymer B	0.95	120	9	stiff
polymer C	0.89	25	2	stiff

Which polymer would you choose to make outdoor garden furniture?



polymer

Explain your choice.

.....

.....

.....

..... [3]

[Total: 6]

3 Chemicals called **esters** can be used to make perfumes or can be used as solvents.



(a) Perfumes have a nice smell.

Perfumes must be insoluble in water so that they do not wash off easily.

Write down **two other** properties that perfumes must have.

.....
.....
..... [2]

(b) Perfumes must be tested before they can be sold.

In the past, perfumes were tested on animals.

Testing on animals is now banned in the UK.

Write about different views that people have about testing perfumes on animals.

.....
.....
.....
..... [2]

(c) Sarah investigates four different solvents.

She wants to know how well they remove a stain.

Look at her results.

Solvent	Percentage of stain removed	
	At 40°C	At 60°C
A	0%	35%
B	10%	60%
C	85%	100%
D	75%	95%

(i) Which solvent is best at removing the stain?

answer.....

[1]

(ii) Sarah decides that the solvents work better at a higher temperature.

How can you tell from Sarah's results?

..... [1]

[Total: 6]

- 4 Fractional distillation separates crude oil into useful fractions.

Look at the table.

It shows some information about fractions obtained from crude oil.

Fraction	Boiling temperature in °C
bitumen	above 350
LPG	less than 40
fuel oil	300 – 350
heating oil	250 – 300
petrol	40 – 200
paraffin	200 – 250

Write about how fractional distillation separates crude oil into fractions and list the fractions in the position, from top to bottom, that they 'exit' the fractionating column.



The quality of written communication will be assessed in your answer to this question.

.....

.....

.....

.....

.....

.....

.....

.....

.....

.....

.....

.....

.....

.....

.....

.....

.....

.....

.....

.....

.....

.....

[6]

[Total: 6]

BLANK PAGE

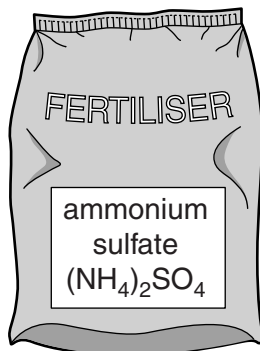
Question 5 begins on page 10

PLEASE DO NOT WRITE ON THIS PAGE

SECTION B – Module C2

5 This question is about fertilisers.

(a) Ammonium sulfate is used as a fertiliser.



The formula for ammonium sulfate is $(\text{NH}_4)_2\text{SO}_4$.

(i) Write down the number of **different elements** in ammonium sulfate.

answer [1]

(ii) Write down the number of **atoms** in this formula.

answer [1]

(b) Chloe makes some ammonium sulfate.

The alkali she uses is ammonia solution.

Which **acid** does she use?

..... [1]

(c) Write about one **benefit** and one **problem** of using fertilisers.

.....

 [2]

[Total: 5]

6 This question is about metals.

Look at the table. It shows some properties of three metals.

	Density in g/cm ³	Relative electrical conductivity (0 = low, 100 = high)	Relative strength (0 = weak, 1000 = very strong)	Corrosion in moist air	Cost per tonne in £
Aluminium	2.7	40	300	does not corrode	770
Copper	8.9	64	400	corrodes slowly	5900
Iron	7.9	11	600	corrodes	200

Look at the picture. It shows overhead power cables used by electric trains.



overhead power cables

Suggest what **properties** are needed by a metal used to make the overhead power cables.

Which metal in the table would you use and why?



The quality of written communication will be assessed in your answer to this question.

..... [6]

[Total: 6]
Turn over

7 (a) Sam makes some copper.

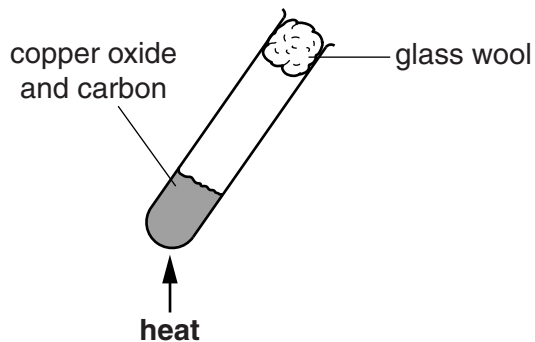
(i) Sam heats copper oxide, CuO , with carbon, C .

Copper, Cu , and carbon dioxide, CO_2 , are made.

Write a **balanced symbol** equation for this reaction.

..... [2]

(ii) Look at the diagram. It shows the apparatus he uses.



Sam measures the mass of the test tube and its contents before and after heating.

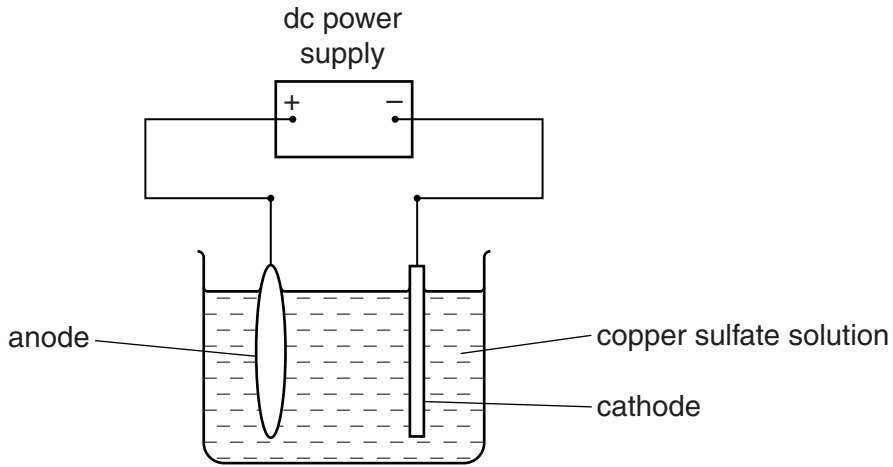
The mass of the test tube and its contents **decreases**.

Suggest why.

.....
..... [1]

(b) The copper Sam makes is impure.

Look at the diagram. It shows the apparatus he uses to purify the copper.



What is the name of the process used to purify copper?

Choose from the list.

crystallisation

electrolysis

eutrophication

neutralisation

thermal decomposition

answer [1]

(c) **Recycling** copper is cheaper than extracting copper from its ore.

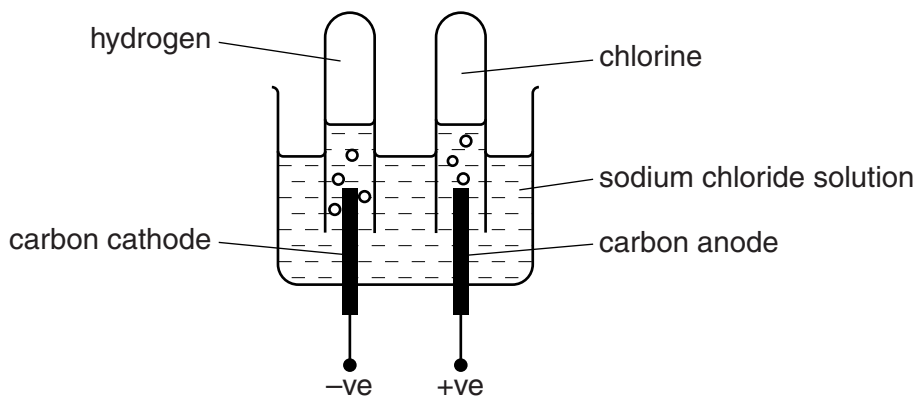
Explain why.

.....
.....
..... [2]

[Total: 6]

8 Molly investigates passing an electric current through sodium chloride solution.

Look at the apparatus she uses.



(a) Look at the list. It shows the particles in sodium chloride solution.



Which particle is a **molecule**?

Choose from the list.

answer

[1]

(b) Chlorine is made in this experiment.

What is the **test** for chlorine gas?

.....

 [2]

[Total: 3]

9 Ammonia is made from nitrogen and hydrogen in the Haber process.

Look at the equation for this reaction.

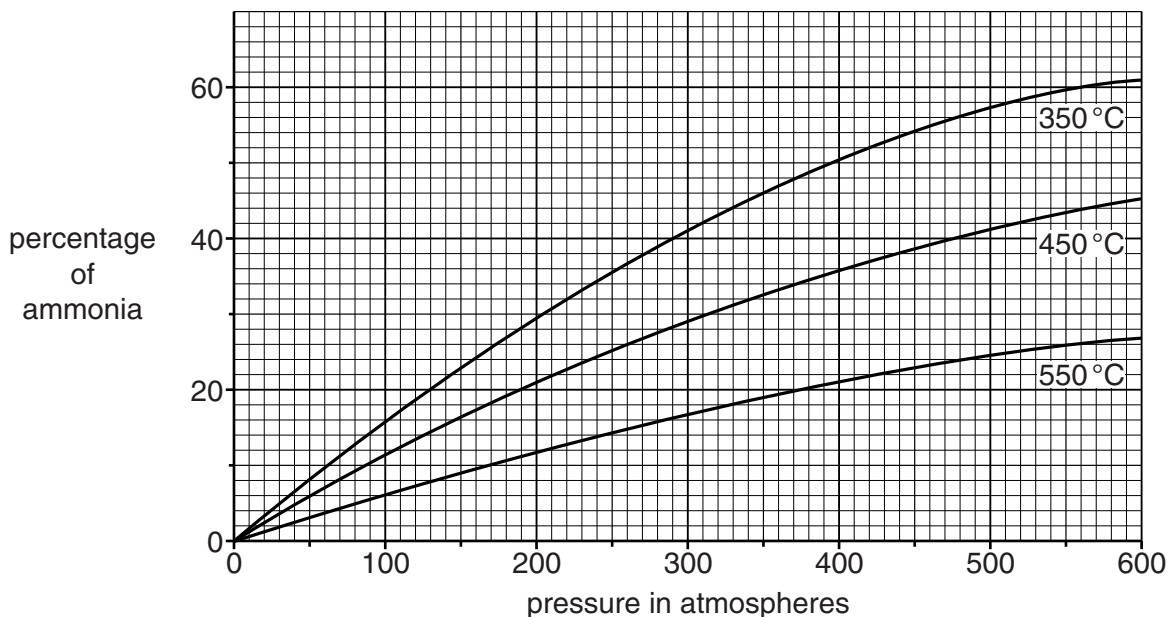


(a) What does the symbol \rightleftharpoons mean?

..... [1]

(b) The percentage of ammonia changes as the temperature and pressure change.

Look at the graph.



Look at the graph for **350°C**.

What is the percentage of ammonia at **400 atmospheres**?

answer % [1]

(c) There are many costs in making ammonia.

One of these is the cost of energy (gas and electricity).

Write about some of the **other** costs of making ammonia.

.....

 [3]

[Total: 5]

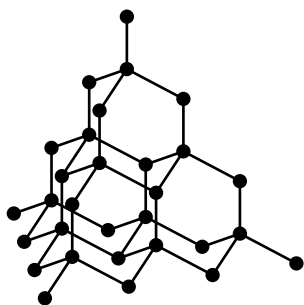
Turn over

16
BLANK PAGE

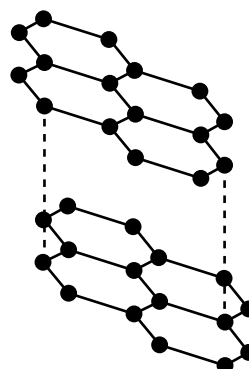
PLEASE DO NOT WRITE ON THIS PAGE

SECTION C – Module C3

10 This question is about diamond and graphite.



diamond



graphite

(a) Diamond and graphite are made of the same element.

Which element?

..... [1]

(b) One property of diamond is that it is very hard.

Diamond is used to make cutting tools.

Write about some other properties of diamond.

.....
.....
.....
..... [3]

[Total: 4]

11 Hilary investigates the reaction between magnesium and hydrochloric acid.

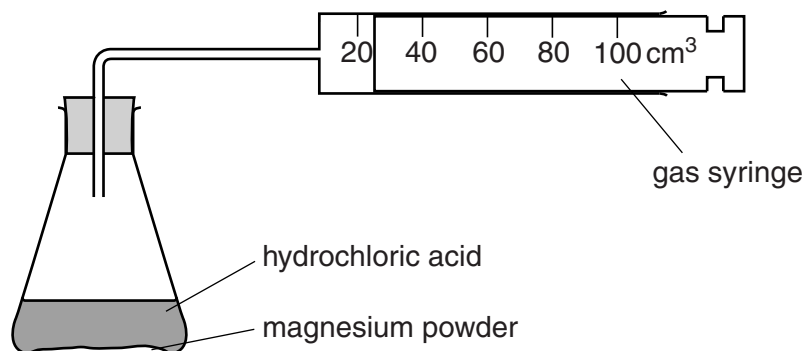
Magnesium chloride and hydrogen are made.

(a) Write down the **word** equation for this reaction.

..... [1]

(b) Look at the diagram.

It shows the apparatus she uses.



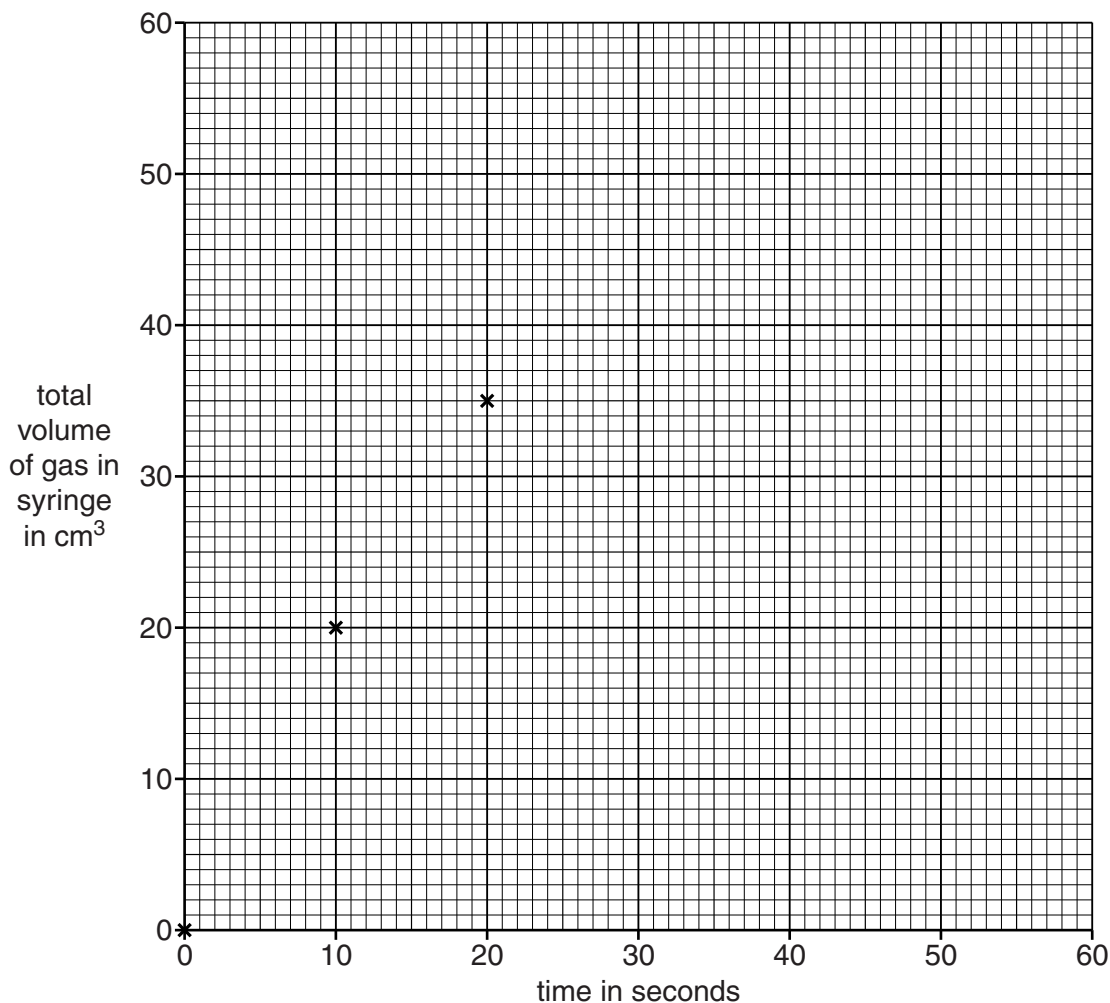
Hilary measures the total volume of gas in the syringe every 10 seconds.

Look at Hilary's results.

Time in seconds	Total volume of gas in syringe in cm ³
0	0
10	20
20	35
30	45
40	49
50	50
60	50

(i) **Plot** these results on the graph and draw the best line through the points.

The first three points have been plotted for you.



[2]

(ii) Look at the results.

The reaction stops after **50 seconds**. No more gas is given off.

Explain why.

..... [1]

(c) Hilary repeats the experiment.

This time she uses **lumps** of magnesium.

The reaction is **slower**.

Explain, using the reacting particle model, why the reaction is slower.

.....

 [2]

20
BLANK PAGE

PLEASE DO NOT WRITE ON THIS PAGE

12 Magnesium sulfate is used as a fertiliser.

It is also used as a medicine.

(a) Magnesium sulfate can be made in industry by a **batch** or a **continuous** process.

Write about the differences between a batch process and a continuous process.

.....

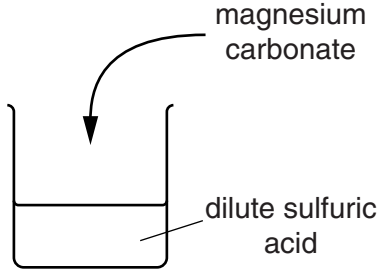
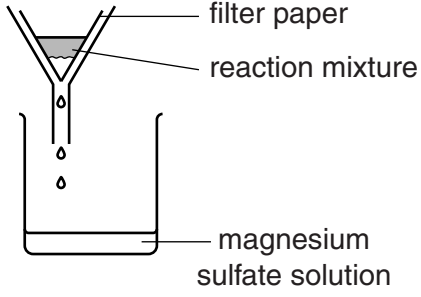
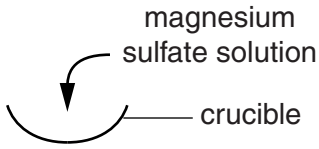
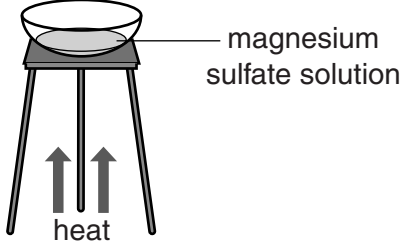
.....

..... [2]

Question 12 continues on page 22

(b) Jim makes some magnesium sulfate.

This is the method he uses.

<p>Step 1</p>  <p>magnesium carbonate</p> <p>dilute sulfuric acid</p>	<p>Jim adds magnesium carbonate to dilute sulfuric acid. He stops adding magnesium carbonate when the mixture stops bubbling.</p>
<p>Step 2</p>  <p>filter paper</p> <p>reaction mixture</p> <p>magnesium sulfate solution</p>	<p>Jim filters the reaction mixture to remove excess magnesium carbonate.</p>
<p>Step 3</p>  <p>magnesium sulfate solution</p> <p>crucible</p>	<p>Jim pours the magnesium sulfate solution into a crucible.</p>
<p>Step 4</p>  <p>magnesium sulfate solution</p> <p>heat</p>	<p>Jim evaporates half of the magnesium sulfate solution. He then leaves the concentrated solution to cool. Crystals are made in the solution.</p>

13 This question is about energy changes during chemical reactions.

(a) Cold packs are used to treat sports injuries.

The cold pack **reduces** the temperature of the injured part of the body.



A chemical reaction happens when the cold pack is squeezed.

Look at the table.

It shows the temperature changes for four different reactions, **A**, **B**, **C** and **D**.

Reaction	Start temperature in °C	Final temperature in °C	Temperature change in °C
A	18	12	-6
B	18	18	0
C	18	25	+7
D	18	23	+5

Which reaction would be the best one for use in the cold pack?

Choose from **A**, **B**, **C** or **D**.

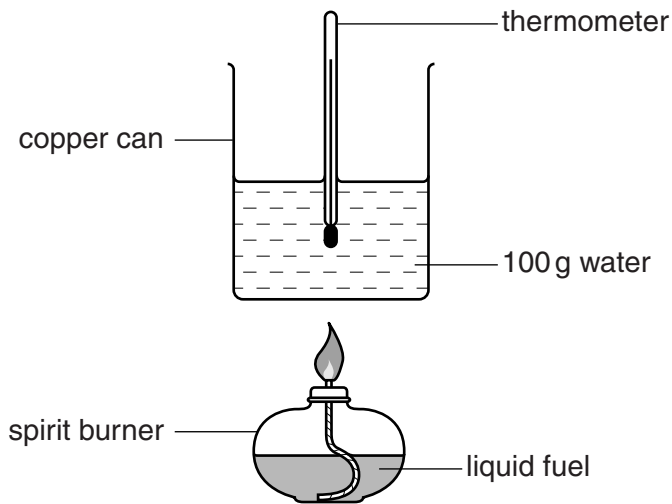
answer

[1]

(b) Aimee and Luke investigate four liquid fuels.

They burn 1.0g of each liquid fuel.

Look at the diagram. It shows the apparatus they use.



Look at the table. It shows their results.

Liquid fuel	Temperature at start in °C	Temperature at end in °C
ethanol	20	40
methylated spirits	21	39
paraffin	22	45
propanol	22	44

(i) Which liquid fuel transfers the **least** energy?

answer

[1]

(ii) Calculate the energy transferred by **ethanol**.

energy transferred = mass × specific heat capacity × temperature change

The specific heat capacity of water is 4.2 J/g°C

.....

answer J

[2]

[Total: 4]

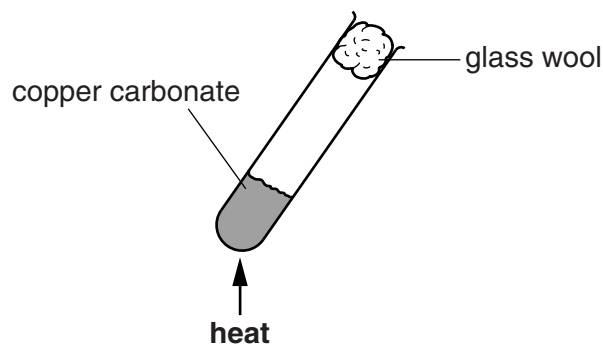
14 John and Sue investigate the decomposition of copper carbonate.

(a) Copper carbonate, CuCO_3 , breaks down into copper oxide, CuO , and carbon dioxide, CO_2 .

Write the **balanced symbol** equation for this reaction.

..... [1]

(b) Look at the diagram. It shows the apparatus they use.



They measure the contents of the test tube before and after heating.

Look at their results.

	Mass in g
mass of contents before heating	12.40
mass of contents after heating	8.00

(i) Calculate the mass of **carbon dioxide** made.

.....
 answer g [1]

(ii) John and Sue repeat the experiment.

This time they use **24.80 g** of copper carbonate.

Calculate the mass of **carbon dioxide** they make this time.

answer g [1]

[Total: 3]

END OF QUESTION PAPER

PLEASE DO NOT WRITE ON THIS PAGE



Copyright Information

OCR is committed to seeking permission to reproduce all third-party content that it uses in its assessment materials. OCR has attempted to identify and contact all copyright holders whose work is used in this paper. To avoid the issue of disclosure of answer-related information to candidates, all copyright acknowledgements are reproduced in the OCR Copyright Acknowledgements Booklet. This is produced for each series of examinations and is freely available to download from our public website (www.ocr.org.uk) after the live examination series. If OCR has unwittingly failed to correctly acknowledge or clear any third-party content in this assessment material, OCR will be happy to correct its mistake at the earliest possible opportunity.

For queries or further information please contact the Copyright Team, First Floor, 9 Hills Road, Cambridge CB2 1GE.

OCR is part of the Cambridge Assessment Group; Cambridge Assessment is the brand name of University of Cambridge Local Examinations Syndicate (UCLES), which is itself a department of the University of Cambridge.

