

Monday 10 June 2013 – Afternoon

GCSE TWENTY FIRST CENTURY SCIENCE CHEMISTRY A

A172/01 Modules C4 C5 C6 (Foundation Tier)

Candidates answer on the Question Paper.
A calculator may be used for this paper.

OCR supplied materials:
None

Other materials required:

- Pencil
- Ruler (cm/mm)

Duration: 1 hour



| | | | |
|-----------------------|--|----------------------|--|
| Candidate forename | | Candidate surname | |
|-----------------------|--|----------------------|--|

| | | | | | | | | | | |
|---------------|--|--|--|--|--|------------------|--|--|--|--|
| Centre number | | | | | | Candidate number | | | | |
|---------------|--|--|--|--|--|------------------|--|--|--|--|

INSTRUCTIONS TO CANDIDATES

- Write your name, centre number and candidate number in the boxes above. Please write clearly and in capital letters.
- Use black ink. HB pencil may be used for graphs and diagrams only.
- Answer **all** the questions.
- Read each question carefully. Make sure you know what you have to do before starting your answer.
- Write your answer to each question in the space provided. Additional paper may be used if necessary but you must clearly show your candidate number, centre number and question number(s).
- Do **not** write in the bar codes.

INFORMATION FOR CANDIDATES

- Your quality of written communication is assessed in questions marked with a pencil (✎).
- The number of marks is given in brackets [] at the end of each question or part question.
- The total number of marks for this paper is **60**.
- This document consists of **20** pages. Any blank pages are indicated.
- The Periodic Table is printed on the back page.
- A list of qualitative tests for ions is printed on page 2.

TWENTY FIRST CENTURY SCIENCE DATA SHEET

Qualitative analysis

Tests for ions with a positive charge

| Ion | Test | Observation |
|-------------------------------|-----------------------------|--|
| calcium Ca^{2+} | add dilute sodium hydroxide | a white precipitate forms; the precipitate does not dissolve in excess sodium hydroxide |
| copper Cu^{2+} | add dilute sodium hydroxide | a light blue precipitate forms; the precipitate does not dissolve in excess sodium hydroxide |
| iron(II) Fe^{2+} | add dilute sodium hydroxide | a green precipitate forms; the precipitate does not dissolve in excess sodium hydroxide |
| iron(III) Fe^{3+} | add dilute sodium hydroxide | a red-brown precipitate forms; the precipitate does not dissolve in excess sodium hydroxide |
| zinc Zn^{2+} | add dilute sodium hydroxide | a white precipitate forms; the precipitate dissolves in excess sodium hydroxide |

Tests for ions with a negative charge

| Ion | Test | Observation |
|---------------------------------|---|--|
| carbonate CO_3^{2-} | add dilute acid | the solution effervesces; carbon dioxide gas is produced (the gas turns lime water from colourless to milky) |
| chloride Cl^- | add dilute nitric acid, then add silver nitrate | a white precipitate forms |
| bromide Br^- | add dilute nitric acid, then add silver nitrate | a cream precipitate forms |
| iodide I^- | add dilute nitric acid, then add silver nitrate | a yellow precipitate forms |
| sulfate SO_4^{2-} | add dilute acid, then add barium chloride or barium nitrate | a white precipitate forms |

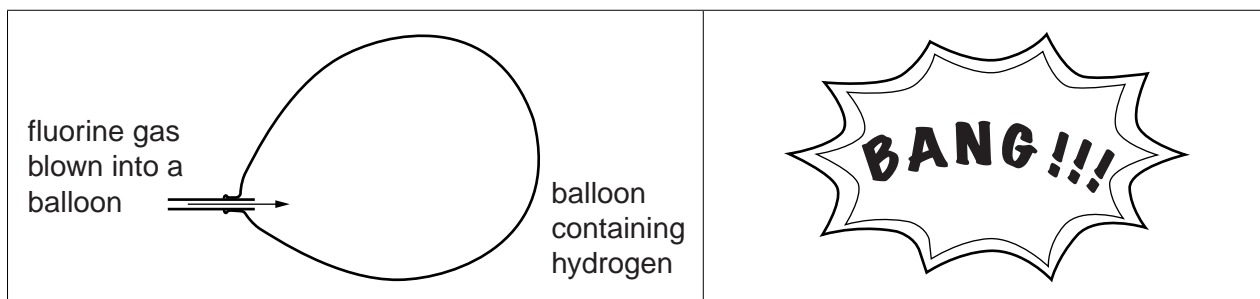
Question 1 begins on page 4

PLEASE DO NOT WRITE ON THIS PAGE

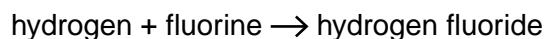
Answer **all** the questions.

- 1 Hydrogen reacts with the elements in Group 7 of the Periodic Table.

Hydrogen and fluorine explode when they are mixed together.



The word equation for the reaction is




- (a) Join the boxes to show the correct formula for each chemical in the reaction.

| | |
|-------------------|----------------|
| hydrogen | HF |
| fluorine | F ₂ |
| hydrogen fluoride | H ₂ |

[2]

- (b) Chlorine is also in Group 7.

Fill in the boxes to show the **word equation** for the reaction between **hydrogen** and **chlorine**.



[2]

- (c) Iodine is another Group 7 element.

It also reacts with hydrogen.

Predict the correct formula for the compound that is made when hydrogen reacts with **iodine**.

Put a (ring) around the correct answer.



[1]

(d) The table shows what happens when fluorine, chlorine and iodine react with hydrogen.

| Element | Reaction when mixed with hydrogen |
|----------|---|
| fluorine | explodes at room temperature |
| chlorine | a small spark is enough to make the mixture explode |
| iodine | reacts slowly when heated strongly |

(i) Look at the order of fluorine, chlorine and iodine in Group 7 of the Periodic Table.

How does the reactivity of the Group 7 elements with hydrogen change as you go down the group?

.....
 [1]

(ii) What do you predict about the reaction between bromine and hydrogen?

Put a tick (✓) in the box next to the best answer.

Hydrogen reacts with bromine when it is heated.

Bromine is too unreactive to react with hydrogen.

Hydrogen reacts with bromine more quickly than with chlorine.


Hydrogen reacts with bromine more slowly than with iodine.

[1]

[Total: 7]

2 Sodium and potassium are elements in Group 1 of the Periodic Table.

Jake watches a video of the reaction between sodium and water.



(a) What is made when sodium reacts with water?

Put a (ring) around each of the **two** correct answers.

carbon dioxide

hydrogen

oxygen

sodium chloride

sodium hydroxide

[2]

(b) Jake thinks that the reaction makes an alkali.

How could you show that a solution has an alkaline pH?

.....

..... [2]

(c) Jake watches another video. This video shows the reaction of **potassium** with water.

How is this reaction different from the reaction of sodium with water?

Put ticks (✓) in the boxes next to the **two** correct answers.

The two reactions make different gases.

The reaction of sodium takes less time than the reaction of potassium.

The reaction with potassium makes an acid.

The two reactions have different rates.

The two reactions make different alkalis.

[1]

(d) Why is it a good idea for Jake to watch videos of the reactions rather than do them himself?

Put a tick (✓) in the box next to the correct answer.

The reactions are too slow.

Sodium and potassium are hazardous to handle.

The chemicals must be heated to a very high temperature before they react.

The gas that is made is toxic.

[1]

[Total: 6]

3 Alex plans to write an article about flame colours for a school science magazine.

He researches the flame colours of some compounds of metals from Group 1 in the Periodic Table.

He talks about his findings with other science students in an internet chat room.

Alex Hi everyone. Have any of you done any research into flame test colours for Group 1? I have found out that potassium and rubidium both give purple flames. I think that each group has its own flame colour.

Bea I've checked out your research and I agree about the flame colours for potassium and rubidium. I just looked up caesium and that's purple too!

Carl I flame-tested some Group 2 elements, none of them were purple. They were all different colours.

Dan Sodium is in Group 1 and gives a yellow flame.

Elly I've looked on the internet and I can't find any elements that give purple flame colours except the ones in Group 1.

Fay Lithium doesn't have a purple flame.

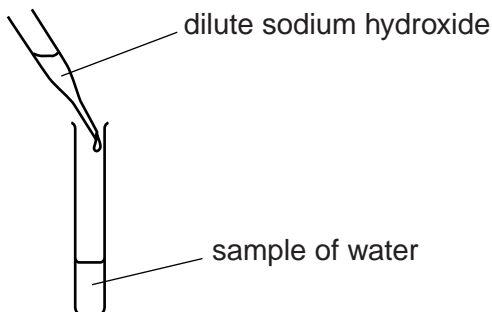
(a) Why is it a good idea for Alex to chat to other students about his work before he writes his article?

.....
..... [2]

4 Joe investigates water that contains calcium ions.

(a) Joe knows that dilute sodium hydroxide can be used to show if water contains calcium ions.

He tests a sample of pure water and a sample of water that contains calcium ions.



Describe what Joe sees when he adds excess sodium hydroxide to each sample of water.

Use the data sheet on page 2 to help you.

.....

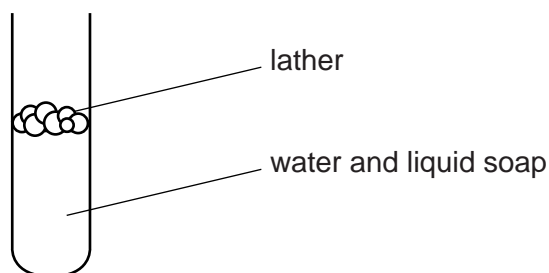
.....

.....

..... [3]

(b) Joe finds out that adding liquid soap to water gives a 'lather'.

A lather is a layer of bubbles on the water.



Joe counts how many drops of soap he needs to make a lather with pure water and with water that contains calcium ions.


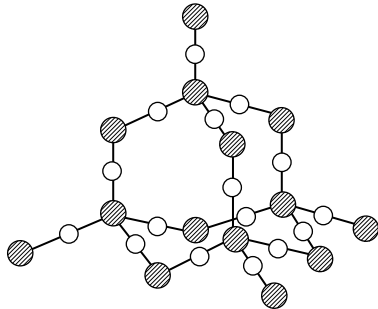
He also tests samples of water from different places.

(i) What must Joe keep the same to make his experiment a fair test?

.....

..... [1]

- 5 Carbon dioxide and silicon dioxide are compounds that occur naturally. The table shows some information about the two compounds.

| | carbon dioxide | silicon dioxide |
|-------------------------|---|---|
| formula | CO ₂ | SiO ₂ |
| structure |  |  |
| melting point in °C | -78 | 1710 |
| boiling point in °C | -57 | 2230 |
| electrical conductivity | does not conduct | does not conduct |

- (a) Which of the statements are **only true for carbon dioxide**, **only true for silicon dioxide** or **true for both**?

Put one tick (✓) in each row.

| | Only true for carbon dioxide (✓) | Only true for silicon dioxide (✓) | True for both (✓) |
|---|--|---|----------------------|
| contains small molecules with a few atoms in each | | | |
| has a giant structure | | | |
| contains covalent bonds | | | |
| is a gas at room temperature | | | |

[3]

(b) Which statement about where carbon dioxide and silicon dioxide are found is correct?

Put a tick (✓) in the box next to the correct answer.

They are both found in the atmosphere.

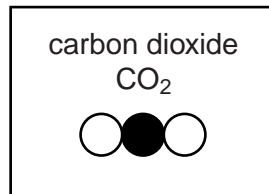
Silicon dioxide is only found in the hydrosphere, carbon dioxide is only found in the lithosphere.

Both carbon dioxide and silicon dioxide are only found in the lithosphere.

Carbon dioxide is found in the atmosphere, silicon dioxide is found in the lithosphere.

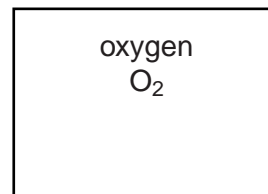
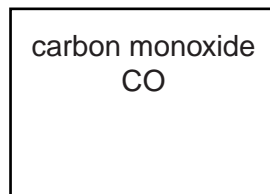
[1]

(c) A molecule of carbon dioxide is shown in the box.



Use the symbols ● and ○ to draw molecules of carbon monoxide and oxygen.

You can use each symbol more than once.



[2]

[Total: 6]

6 A mining company wants to find a new area to mine for metals.

The company tests rock from two possible sites for a new mine.

The table shows their results.

| Elements in the rock | Percentage of each element in rock from site A | Percentage of each element in rock from site B |
|----------------------|--|--|
| oxygen | 47 | 38 |
| silicon | 28 | 21 |
| aluminium | 8 | 18 |
| iron | 5 | 10 |
| copper | 0 | 0.5 |
| other elements | | 12.5 |

(a) What percentage of **other elements** are in the rock taken from site A?

..... % [2]

(b) What are the main **similarities** between the rocks taken from the two sites?

.....

 [2]

(c) The company wants to mine for metals.

Which site is better?

Explain your reasoning.

.....

 [2]

[Total: 6]


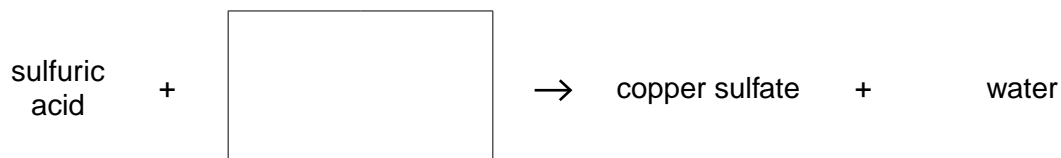
- 7 (a) Two different copper compounds react with sulfuric acid to make copper sulfate.

Complete the word equations.

Choose from this list.

copper carbonate copper chloride copper oxide

copper nitrate copper sulfate



[2]

- (b) Other acids also react to make copper compounds.

Draw lines to connect each **copper compound** to the correct **acid that can be used to make it**.

copper compound

copper chloride

copper nitrate

copper citrate

acid that can be used to make it

citric acid

ethanoic acid

hydrochloric acid

nitric acid

[2]

(c) Pure acids have different states. Some are solids, some are liquids and some are gases.

Draw lines to connect each **acid** to its correct **state symbol**.

acid

state symbol

sulfuric acid (liquid)

citric acid (solid)

(s)

(g)

(aq)

(l)

[1]

[Total: 5]

8 The table shows some information about the relative formula masses for some compounds.

| Name of compound | Formula | Relative atomic masses of atoms in the formula | | Relative formula mass of compound |
|--------------------|---------|--|------|-----------------------------------|
| | | | | |
| lithium chloride | LiCl | Li | 7 | 7 + 35.5 = 42.5 |
| | | Cl | 35.5 | |
| sodium chloride | NaCl | Na | 23 | 23 + 35.5 = 58.5 |
| | | Cl | 35.5 | |
| potassium chloride | KCl | K | 39 | 39 + 35.5 = 74.5 |
| | | Cl | 35.5 | |

(a) Explain the differences between the relative formula masses of these three compounds.

.....

.....

..... [2]

(b) Lithium fluoride is another compound of lithium.

The formula for lithium fluoride is LiF.

(i) Use the Periodic Table to find the relative atomic mass of fluorine.

Relative atomic mass of fluorine = [1]

(ii) Use your answer to work out the relative formula mass of lithium fluoride.

Relative formula mass of lithium fluoride, LiF = [1]

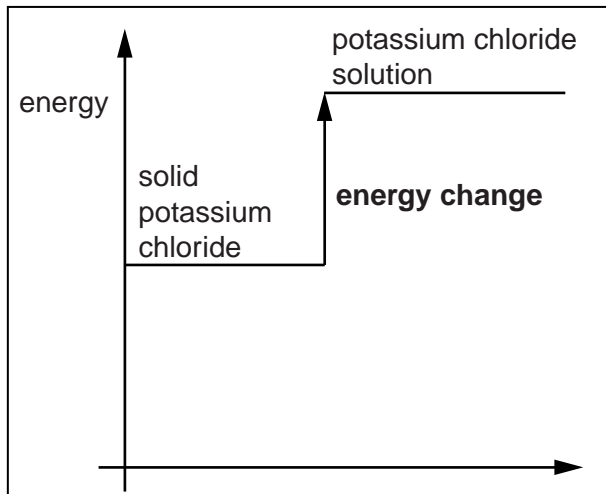
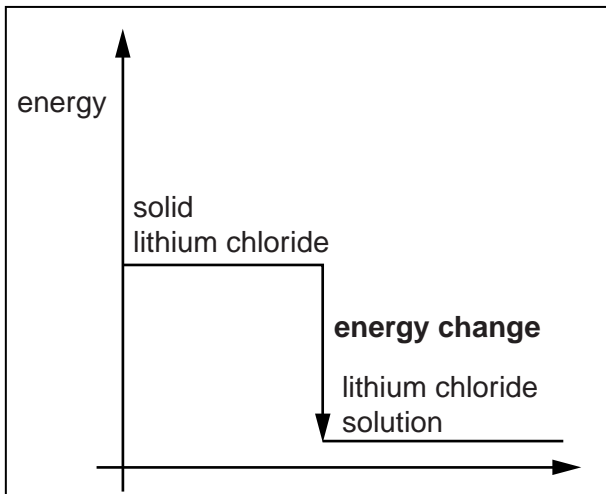
[Total: 4]

9 Tom is doing a presentation on energy changes in reactions.

He uses slides that show the energy changes when lithium chloride and potassium chloride dissolve in water.

SLIDE 1

SLIDE 2



Tom uses the slides to explain:

- what exothermic and endothermic mean
- how you can tell which reaction is exothermic and which is endothermic.

(a) Write down what Tom should say.



The quality of written communication will be assessed in your answer.

.....

.....

.....

.....

.....

.....

.....

.....

.....

.....

.....

.....

.....

.....

.....

.....

.....

.....

.....

.....

[6]

- (b) The energy changes for reactions in industry are carefully controlled. Why is this important?

Put ticks (✓) in the boxes next to the **two** best answers.

Energy given out by reactions can be used to heat buildings.

Reactions that give out energy use too much fuel to keep them hot.

Energy changes in reactions affect the rate.

Containers for reactions may be damaged by extreme temperatures.

Reactions that take in energy need to be continuously cooled.

[2]

[Total: 8]

END OF QUESTION PAPER



Copyright Information

OCR is committed to seeking permission to reproduce all third-party content that it uses in its assessment materials. OCR has attempted to identify and contact all copyright holders whose work is used in this paper. To avoid the issue of disclosure of answer-related information to candidates, all copyright acknowledgements are reproduced in the OCR Copyright Acknowledgements Booklet. This is produced for each series of examinations and is freely available to download from our public website (www.ocr.org.uk) after the live examination series.

If OCR has unwittingly failed to correctly acknowledge or clear any third-party content in this assessment material, OCR will be happy to correct its mistake at the earliest possible opportunity.

For queries or further information please contact the Copyright Team, First Floor, 9 Hills Road, Cambridge CB2 1GE.

OCR is part of the Cambridge Assessment Group; Cambridge Assessment is the brand name of University of Cambridge Local Examinations Syndicate (UCLES), which is itself a department of the University of Cambridge.

The Periodic Table of the Elements

| | 1 | 2 | 3 | 4 | 5 | 6 | 7 | 0 | | | | | | | | | | | | | | | | | | | | | | | | |
|--|-------------------------------|-----------------------------|--------------------------------|-------------------------------------|--------------------------------|----------------------------------|-------------------------------|-------------------------------|----------------------------------|------------------------------------|-----------------------------------|---|---------------------------|-----------------------------|----------------------------|-----------------------------|----------------------------|---------------------------|----------------------------|---------------------------|---------------------------|--------------------------|---------------------------|----------------------------|------------------------|---------------------------|----------------------------|------------------------|---------------------------|----------------------------|----------------------------|-------------------------|
| | 7 Li lithium 3 | 9 Be beryllium 4 | 11 Na sodium 11 | 12 Mg magnesium 12 | 13 Al aluminium 13 | 14 Si silicon 14 | 15 P phosphorus 15 | 16 S sulfur 16 | 17 Cl chlorine 17 | 18 Ar argon 18 | | | | | | | | | | | | | | | | | | | | | | |
| | 19 K potassium 19 | 20 Ca calcium 20 | 21 Sc scandium 21 | 22 Ti titanium 22 | 23 V vanadium 23 | 24 Cr chromium 24 | 25 Mn manganese 25 | 26 Fe iron 26 | 27 Co cobalt 27 | 28 Ni nickel 28 | 29 Cu copper 29 | 30 Zn zinc 30 | 31 Ga gallium 31 | 32 Ge germanium 32 | 33 As arsenic 33 | 34 Se selenium 34 | 35 Br bromine 35 | 36 Kr krypton 36 | | | | | | | | | | | | | | |
| | 37 Rb rubidium 37 | 38 Sr strontium 38 | 39 Y yttrium 39 | 40 Zr zirconium 40 | 41 Nb niobium 41 | 42 Mo molybdenum 42 | 43 Tc technetium 43 | 44 Ru ruthenium 44 | 45 Rh rhodium 45 | 46 Pd palladium 46 | 47 Ag silver 47 | 48 Cd cadmium 48 | 49 In indium 49 | 50 Sn tin 50 | 51 Sb antimony 51 | 52 Te tellurium 52 | 53 I iodine 53 | 54 Xe xenon 54 | | | | | | | | | | | | | | |
| | 55 Cs caesium 55 | 56 Ba barium 56 | 57 La* lanthanum 57 | 58 Ce cerium 58 | 59 Pr praseodymium 59 | 60 Nd neodymium 60 | 61 Pm promethium 61 | 62 Sm samarium 62 | 63 Eu europium 63 | 64 Gd gadolinium 64 | 65 Tb terbium 65 | 66 Dy dysprosium 66 | 67 Ho holmium 67 | 68 Er erbium 68 | 69 Tm thulium 69 | 70 Yb ytterbium 70 | 71 Lu lutetium 71 | 72 Hf hafnium 72 | 73 Ta tantalum 73 | 74 W tungsten 74 | 75 Re rhenium 75 | 76 Os osmium 76 | 77 Ir iridium 77 | 78 Pt platinum 78 | 79 Au gold 79 | 80 Hg mercury 80 | 81 Tl thallium 81 | 82 Pb lead 82 | 83 Bi bismuth 83 | 84 Po polonium 84 | 85 At astatine 85 | 86 Rn radon 86 |
| | [223] Fr francium 87 | [226] Ra radium 88 | [227] Ac* actinium 89 | [261] Rf rutherfordium 104 | [262] Db dubnium 105 | [266] Sg seaborgium 106 | [264] Bh bohrium 107 | [277] Hs hassium 108 | [268] Mt meitnerium 109 | [271] Ds darmstadtium 110 | [272] Rg roentgenium 111 | Elements with atomic numbers 112-116 have been reported but not fully authenticated | | | | | | | | | | | | | | | | | | | | |

| | | |
|---|----------|---|
| 1 | H | 1 |
| | hydrogen | |

| |
|------------------------|
| relative atomic mass |
| atomic symbol |
| atomic (proton) number |

Key

* The lanthanoids (atomic numbers 58-71) and the actinoids (atomic numbers 90-103) have been omitted.

The relative atomic masses of copper and chlorine have not been rounded to the nearest whole number.