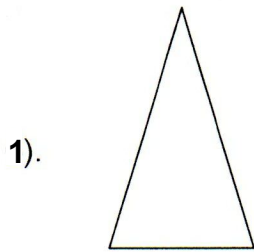



# **Regular polygons and their symmetry**

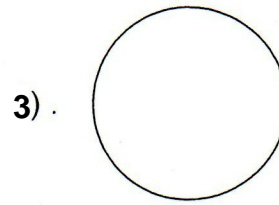
Write the reflective and rotational symmetry of the following figures.



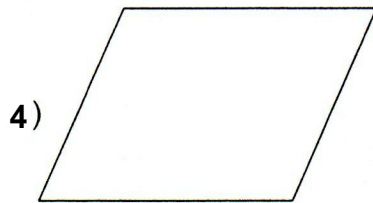
-----  
-----




-----  
-----



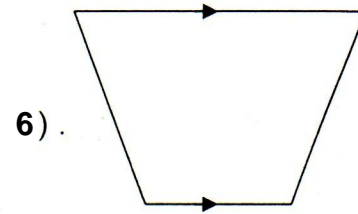
-----  
-----



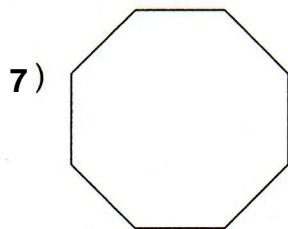
-----  
-----



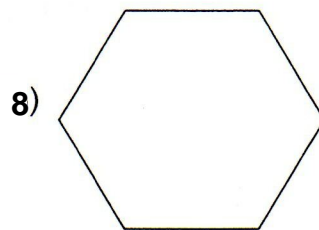
-----  
-----



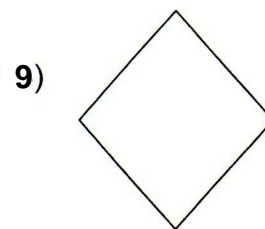
-----  
-----



-----  
-----



-----  
-----



-----  
-----

10) Draw the regular Pentagon and draw the lines of symmetry.