



Capacity


There are different bags of rice available in a shop:



A



B



C



D



E

How many bags:

1. B make A? _____
2. C make A? _____
3. D make A? _____
4. E make A? _____
5. C make B? _____
6. D make B? _____
7. E make B? _____
8. D make C? _____
9. E make C? _____
10. E make D? _____

Convert the following smaller units into bigger units.

1. 25m = _____ km
2. 20cm = _____ m
3. 130ml = _____ L
4. 25g = _____ kg
5. 405g = _____ kg
6. 2200g = _____ kg
7. 1550gm = _____ kg
8. 725cm = _____ m
9. 122cm = _____ m
10. 1025cm = _____ m