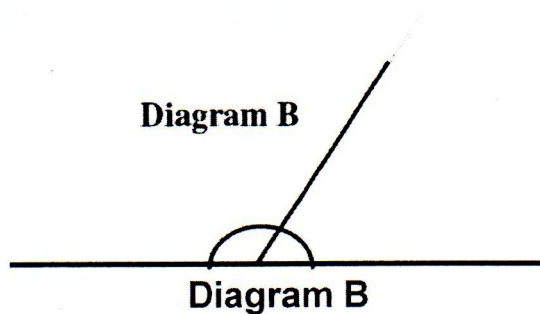
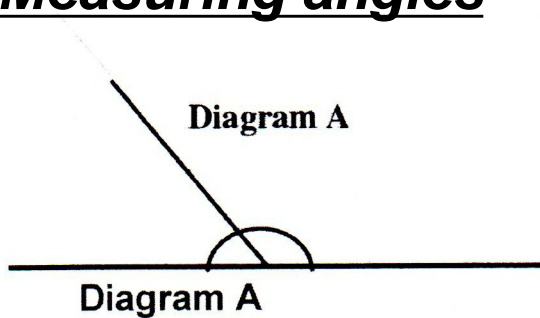


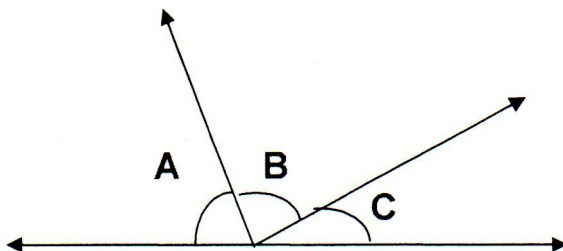
Measuring angles



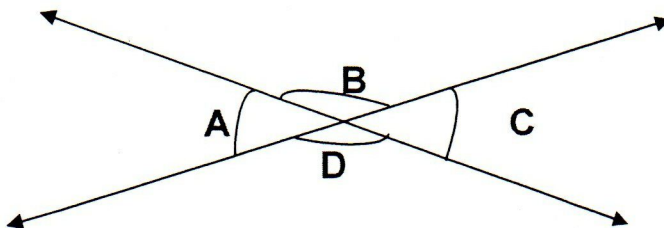
1. Measure the two angles in diagram **A**. _____ and _____
Add them up. _____

Do the same for diagram **B**.

2. Measure the two angles in diagram **B**. _____ and _____
Add them up. _____



3. Measure the angles $A =$ _____, $B =$ _____, $C =$ _____.
4. Add the angles A, B and C _____



5. Measure the angles $A =$ _____, $B =$ _____, $C =$ _____, $D =$ _____.
6. Add the angles A, B, C and D _____