






Finding price and find next numbers

Q: The price of one egg is 10p; find the price of:

1.  _____
2.  _____
3.  _____
4.  _____
5.  _____

6. . Write the next numbers up to 100:

16, 26, 36, 46, _____, _____, _____, _____, _____.

7. . Write the next numbers up to 100:

11, 22, 33, 44, _____, _____, _____, _____, _____.

8. . Write the numbers ending with 0 up to 100:

10, 20, 30, _____, _____, _____, _____, _____, _____.