














Shapes

Fill in the blanks:

| | Shape Name | Shape Picture | Number of triangular faces | Number of rectangular faces (including squares) | Number of hexagonal faces | Number of octagonal faces |
|----|----------------------|---|----------------------------|---|---------------------------|---------------------------|
| 1. | Cube |  | 0 | 6 | 0 | 0 |
| 2. | Cuboid |  | | | | |
| 3. | Triangular prism |  | | | | |
| 4. | Hexagonal prism |  | | | | |
| 5. | Octagonal prism |  | | | | |
| 6. | Square based pyramid |  | | | | |
| 7. | Tetrahedron |  | | | | |

| | Shape Name | Shape Picture | Number of faces | Number of edges | Number of vertices | Number of right angles on all the faces |
|-----|----------------------|---|-----------------|-----------------|--------------------|---|
| 8. | |  | 6 | 12 | 8 | 24 |
| 9. | |  | | | | |
| 10. | Triangular prism | | | | | |
| 11. | |  | | | | |
| 12. | |  | | | | |
| 13. | Square based pyramid | | | | | |
| 14. | |  | | | | |
| 15. | |  | | | | |